

## 2007 TEXAS STATE JUNIOR CLASSICAL LEAGUE GEOGRAPHY OF THE ANCIENT WORLD TEST

**DIRECTIONS:** Please mark the letter of the correct answer on your scantron answer sheet.

### General Questions:

1. Which of these regions of Greece was most northerly?  
a. Thessaly                      b. Euboea                      c. Boetia                      d. Thrace
2. Which city was the furthest east?  
a. Rhegium                      b. Miletus                      c. Knossos                      d. Puteoli
3. Which of these hills of Rome is the southernmost?  
a. Aventine                      b. Quirinal                      c. Capitoline                      d. Palatine
4. Ovid's home in exile, Tomi, was just south of the \_\_\_\_\_ River.  
a. Danube                      b. Rhone                      c. Rhine                      d. Po
5. Arpinum, the hometown of Gaius Marius, is located in what direction from Rome?  
a. northwest                      b. southwest                      c. northeast                      d. southeast
6. The Temple of Venus Genetrix was located in which forum?  
a. Trajan's                      b. Forum Romanum                      c. Caesar's                      d. Nerva's
7. Which of these Sicilian towns was farthest east?  
a. Agrigentum                      b. Drepanum                      c. Lilybaeum                      d. Syracuse
8. Taking the Via Domitiana south to the toe of Italy, one would find the road ending in the town of...  
a. Formiae                      b. Tarentum                      c. Brundisium                      d. Rhegium
9. The Erectheum was built in...  
a. Rome                      b. Athens                      c. Pompeii                      d. Rhodes
10. The most southerly of the Seven Wonders of the Ancient World was the...  
a. Great Pyramid                      b. Pharos                      c. Hanging Gardens                      d. Mausoleum

**People and Places:** Choose the places with which these famous persons of the ancient world are most closely associated.

11. Caesar and Vercingetorix  
a. Londinium                      b. Aquae Sextiae                      c. Alesia                      d. Pharsalus
12. Phillip II  
a. Epirus                      b. Sparta                      c. Knossos                      d. Macedonia
13. Leonidas  
a. Athens                      b. Ithica                      c. Alexandria                      d. Sparta

**2007 Texas State Junior Classical League  
Geography of the Ancient World Test**

**CONTEST CODE: 16**

14. Priam  
a. Troy                      b. Ithica                      c. Sparta                      d. Halicarnassus
15. Trajan  
a. Egypt                      b. Dacia                      c. Gaul                      d. Britannia

**In what modern locations would you find the sites of these ancient places?**

16. Lutetia  
a. France                      b. England                      c. Germany                      d. Belgium
17. Actium  
a. Sicily                      b. Cyprus                      c. Greece                      d. Egypt
18. Zama  
a. Algeria                      b. Morocco                      c. Tunisia                      d. Jordan
19. Bithynia  
a. Bulgaria                      b. Turkey                      c. Ukraine                      d. Syria
20. Mount Olympus  
a. Macedonia                      b. Bulgaria                      c. Albania                      d. Greece

**Match the ancient names of the following places, rivers and seas to the correct modern names.**

21. Arausio  
a. Algeria                      b. Albania                      c. Stabiae                      d. Orange
22. Padus  
a. Po                      b. Padua                      c. Pisa                      d. Milan
23. Pontus Euxinus  
a. Caspian Sea                      b. Black Sea                      c. Mediterranean Sea                      d. Red Sea
24. Puteoli  
a. Pisa                      b. Pozzuoli                      c. Padua                      d. Po
25. Byzantium  
a. Bulgaria                      b. Burgundy                      c. Istanbul                      d. Thessaly

**Starting with question #26, you will need to refer to the maps and illustrations in the back section of this test packet.**

**Map of Greece and the Eastern Mediterranean: For questions #26-40, consult Map # 1. Match each ancient place with the correct numbered spot on the map.**

26. Piraeus	a. 2	b. 1	c. 7	d. 11
27. Lemnos	a. 3	b. 9	c. 13	d. 15
28. Samos	a. 15	b. 13	c. 3	d. 6
29. Miletus	a. 12	b. 5	c. 14	d. 1
30. Pylos	a. 11	b. 1	c. 2	d. 7
31. Halicarnassus	a. 4	b. 12	c. 7	d. 3
32. Knossos	a. 15	b. 11	c. 2	d. 10
33. Sparta	a. 2	b. 11	c. 7	d. 1
34. Troy	a. 3	b. 14	c. 4	d. 5
35. Thermopylae	a. 8	b. 7	c. 13	d. 2
36. Scyros	a. 13	b. 9	c. 15	d. 6
37. Byzantium	a. 4	b. 8	c. 14	d. 3
38. Corinth	a. 11	b. 2	c. 7	d. 8
39. Rhodes	a. 13	b. 15	c. 9	d. 3
40. Samothrace	a. 9	b. 3	c. 15	d. 13

**Map of the Roman Empire: For questions #41-50, consult Map # 2. Match the names to the correct numbered locations.**

41. Sardinia	a. 19	b. 24	c. 18	d. 20
42. Hibernia	a. 1	b. 3	c. 2	d. 13
43. Tarraconensis	a. 6	b. 4	c. 5	d. 7
44. Lugdonensis	a. 7	b. 8	c. 9	d. 21
45. Moesia	a. 27	b. 16	c. 28	d. 13
46. Galatia	a. 35	b. 39	c. 45	d. 50
47. Aquitania	a. 7	b. 10	c. 11	d. 8
48. Mauretania	a. 23	b. 45	c. 53	d. 17
49. Narbonensis	a. 10	b. 15	c. 16	d. 8
50. Belgica	a. 7	b. 10	c. 6	d. 5

**Map of Ancient Italy: For questions # 51-60, consult Map # 3. Match the names with the correct numbered locations. Be sure to consult both the large map and the smaller inset map.**

51. Misenum	a. 47	b. 46	c. 45	d. 48
52. Lilybaeum	a. 37	b. 36	c. 35	d. 38
53. Ostia	a. 27	b. 24	c. 29	d. 30
54. Herculaneum	a. 45	b. 44	c. 41	d. 48
55. Messana	a. 32	b. 30	c. 35	d. 36
56. Verona	a. 4	b. 6	c. 16	d. 12
57. Syracuse	a. 36	b. 35	c. 30	d. 29
58. Tarentum	a. 34	b. 33	c. 31	d. 39
59. Heraclea	a. 34	b. 29	c. 33	d. 32
60. Capri	a. 14	b. 24	c. 48	d. 47

**Illustrations:** For questions # 61-70, consult the illustrations after the maps.

**Questions # 61-65 refer to illustration #1, which depicts part of the Roman Forum and the Imperial Fora adjacent to it.**

61. In illustration #1, letter O labels the Temple of...  
a. Jupiter Stator      b. Mars Ultor      c. Jupiter Capitolinus      d. Peace
62. In illustration #1, letter M labels the...  
a. Basilica Aemilia      b. Basilica Julia      c. Curia      d. Tabularium
63. In illustration #1, letter N labels the...  
a. Pantheon      b. Temple of Peace      c. Temple of Minerva      d. Aerarium
64. In illustration #1, letter D labels the Temple of...  
a. Saturn      b. Concord      c. Vespasian      d. Castor and Pollux
65. In illustration #1, letter I labels the Temple of...  
a. Vesta      b. Castor and Pollux      c. Venus and Rome      d. Julius Caesar

**Questions # 66-70 refer to specific illustrations starting with illustration #2.**

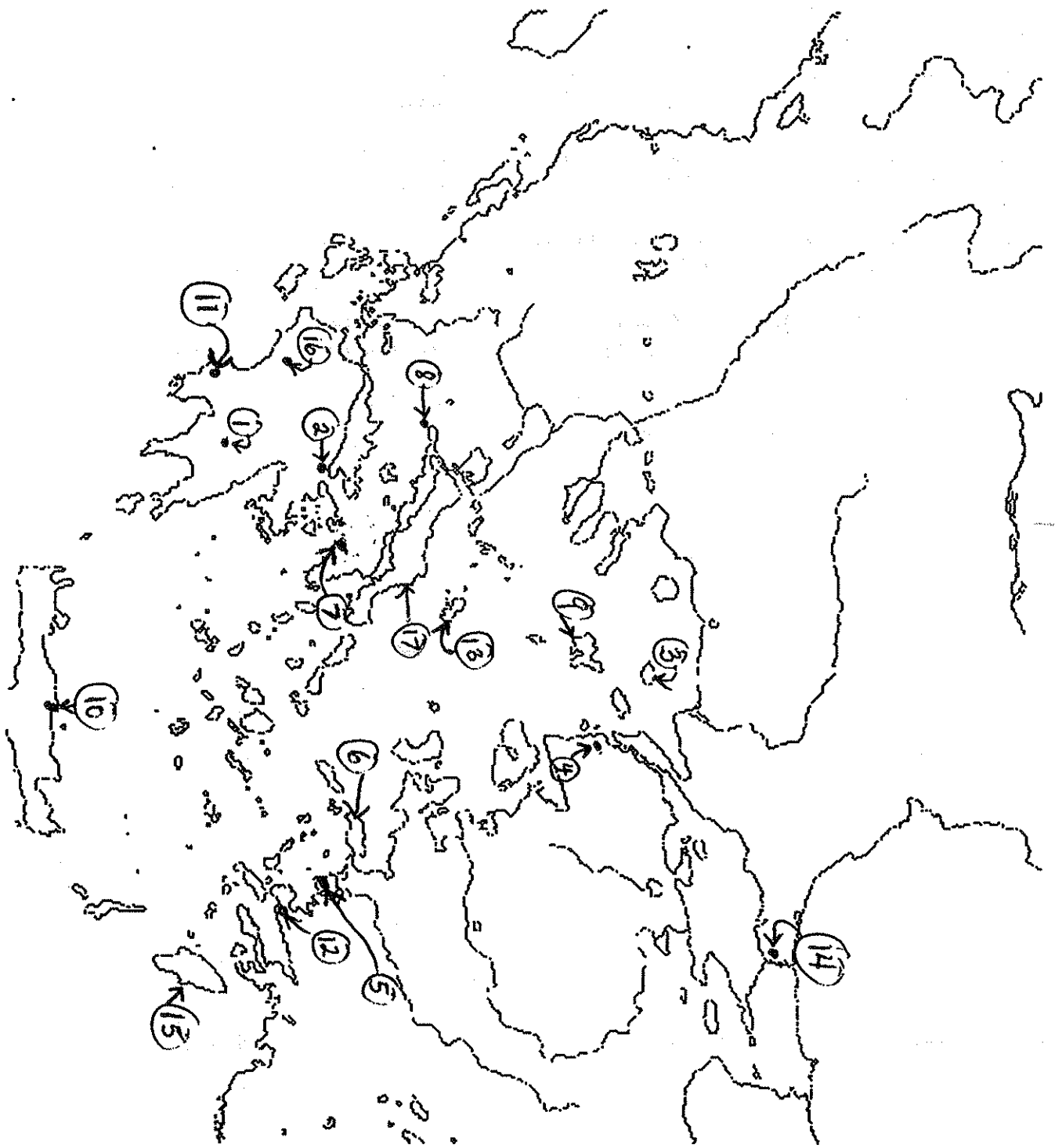
66. The building in illustration #2 was destroyed and rebuilt several times due to natural disasters such as fire and a lightning strike. Who reconstructed this building in the final form you see in this picture?  
a. Agrippa      b. Domitian      c. Trajan      d. Hadrian
67. In illustration #3, which shows a structure near one of the gates of Rome, whose tomb is visible?  
a. Cestius'      b. Caecilia Metella's      c. Hadrian's      d. Scipio's
68. In illustration #4, whose wonderful tomb is this, which once stood Asia Minor?  
a. Alexander's      b. Mausolus'      c. Ptolemy's      d. Phillip II
69. In illustration #5, you can see a type of building support found in some of the most famous Greek structures such as the Erechtheion on the Acropolis and the treasuries of Delphi. What is the term for "columns" such as this one?  
a. Atlas      b. Tuscan      c. Caryatid      d. composite
70. Illustration #6 shows the layout of the vacation home of one of Rome's emperors. It was a vast complex containing architectural elements and pieces of art that reflected the owner's interest in the different cultures he admired and had studied during his vast travels. Who was this emperor?  
a. Domitian      b. Hadrian      c. Trajan      d. Marcus Aurelius

**Please turn the page for the tie-break questions!**

**Tie-Breakers: Please bubble your answers for the tie-breakers as #96-100 on your scantron. These questions will be scored only to break ties.**

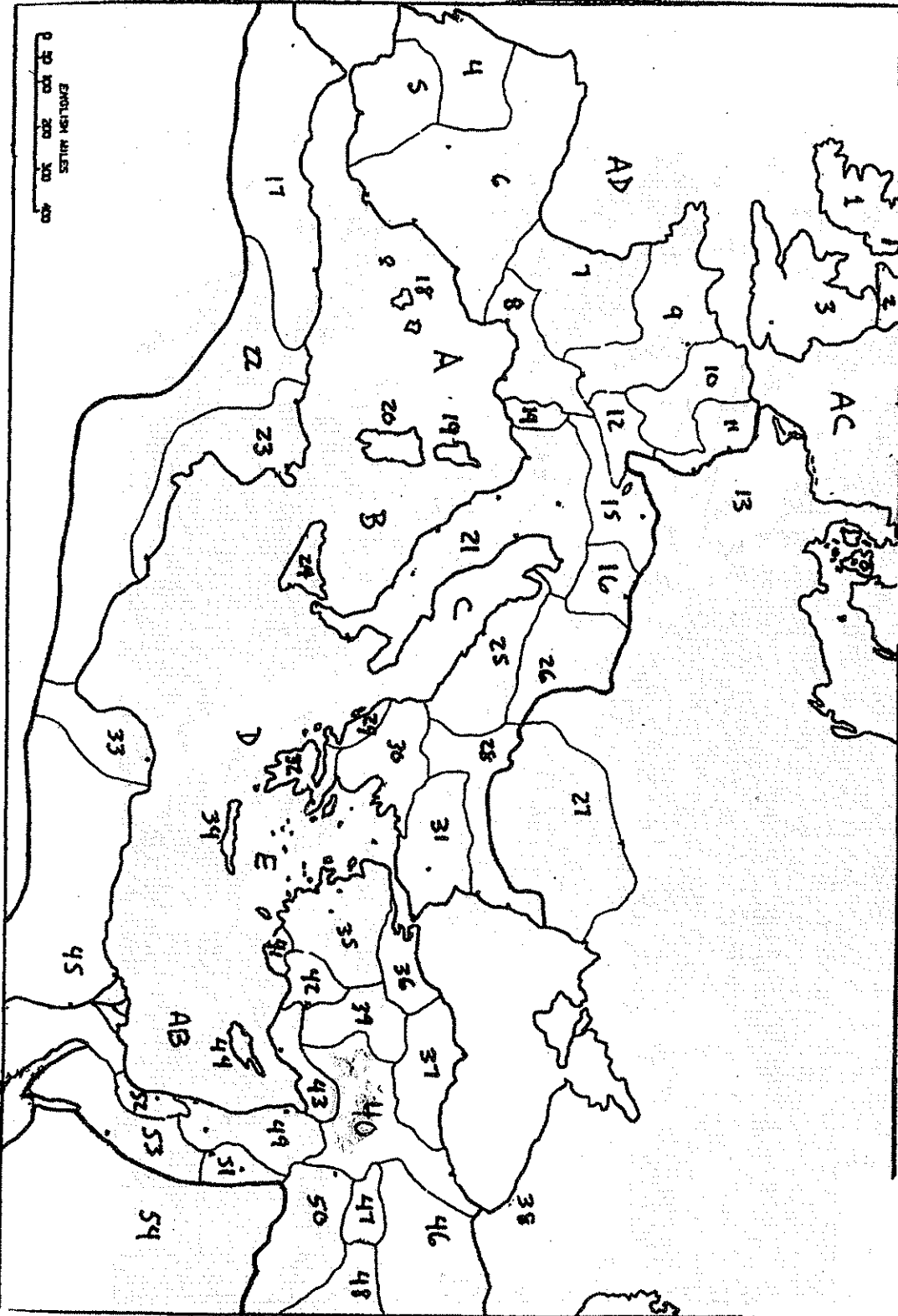
To answer #96-100, refer to the maps and illustrations as instructed in each question:

96. On Map #1, the map of Greece, the number 16 labels...  
a. Olympia                      b. Heraclea                      c. Methone                      d. Argolis
97. On Map #1, the map of Greece, the number 17 labels...  
a. Cephallenia                      b. Carpathos                      c. Imbros                      d. Euboea
98. On Map #2, the map of the Roman Empire, the number 35 labels...  
a. Pontus                      b. Assyria                      c. Asia                      d. Armenia
99. On Map #2, the map of the Roman Empire, the number 40 labels...  
a. Cyprus                      b. Cappadocia                      c. Mesopotamia                      d. Thracia
100. In illustration #1, the diagram of the Fora, letter K is the Temple of...  
a. Venus and Rome                      b. Vespasian and Titus                      c. Fortuna                      d. Antoninus and Faustina

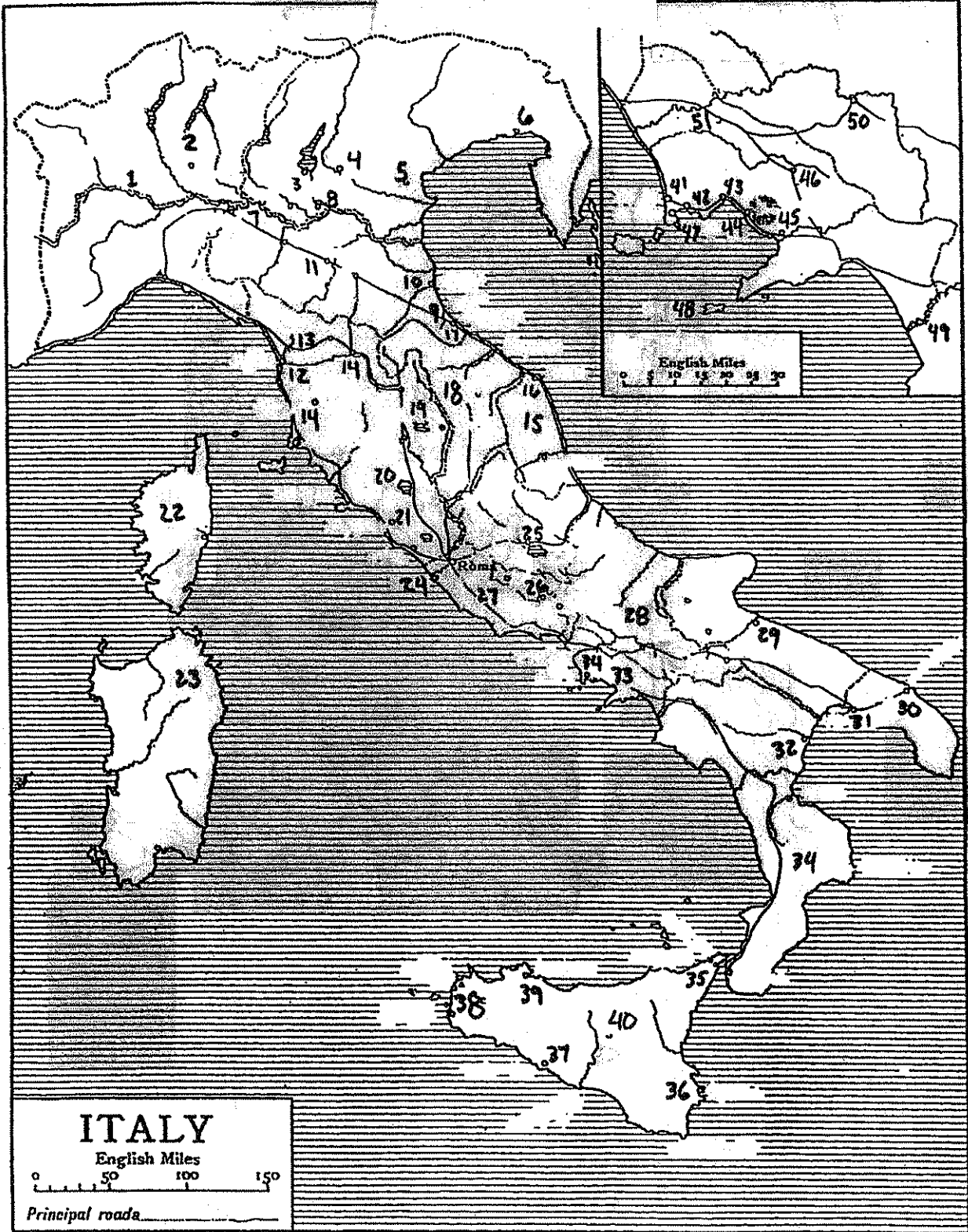


Map # 1

Map # 2



Map # 3





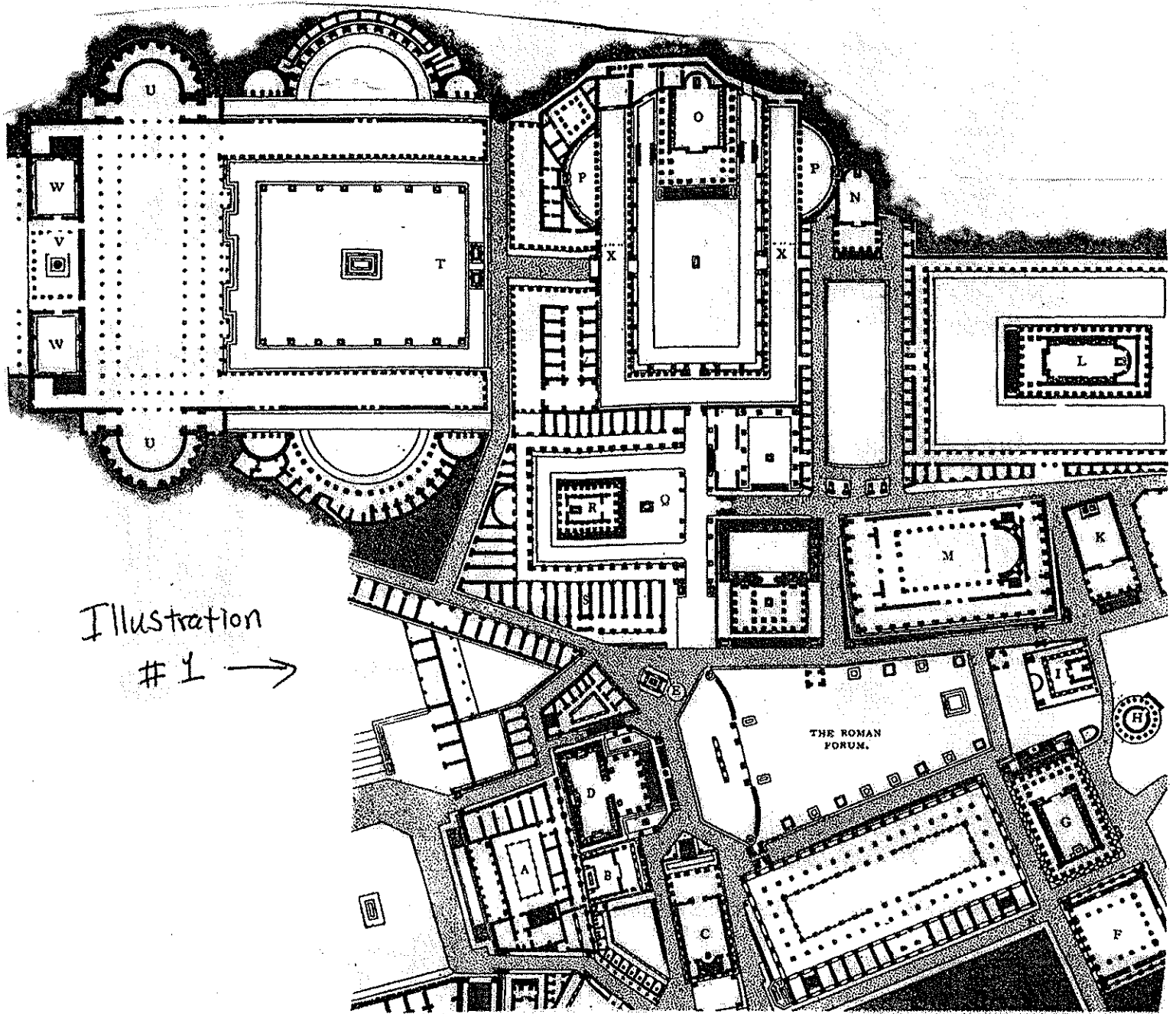



Illustration  
# 1 →



← Illustration # 2




Illustration  
#3




Illustration  
#4



Illustration

#5

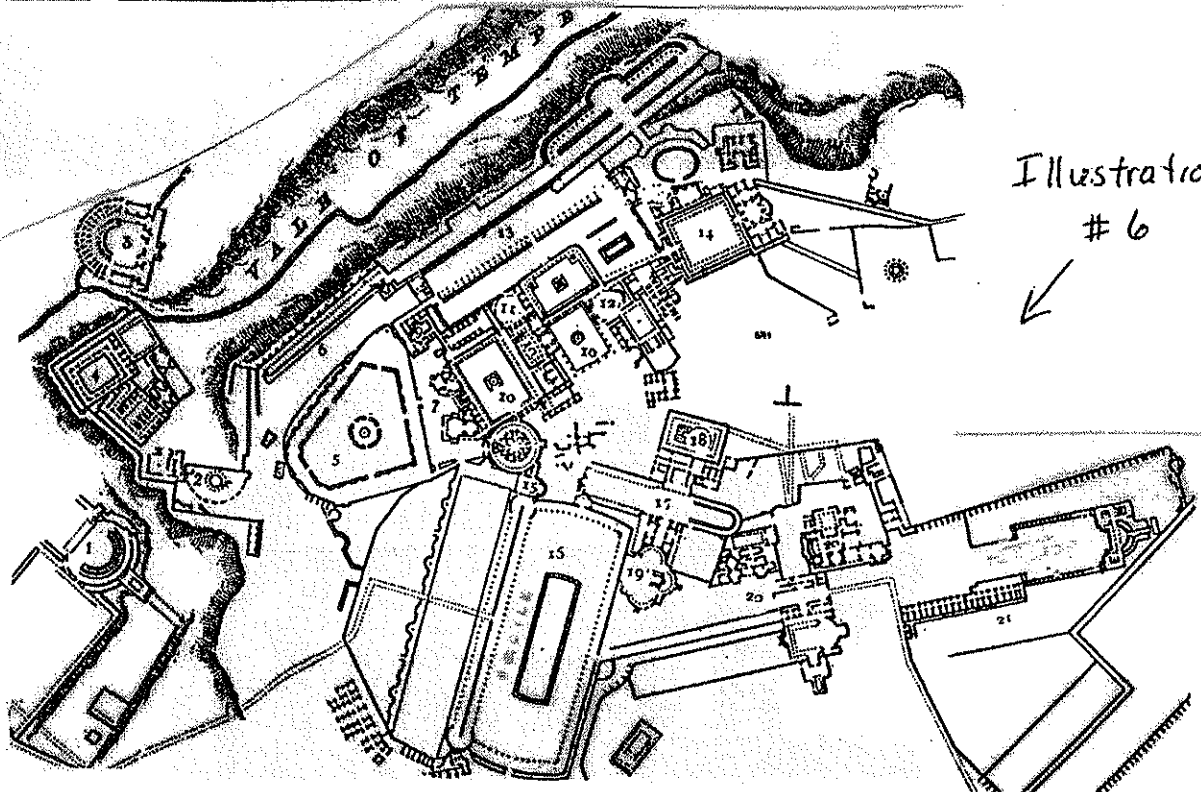


Illustration  
#6

