

# 2002 TSJCL Ancient Geography Test




contest code 16

Part 1: Where would you go to see each of the following?

1. Palace of Knossos
  - a) Sicily
  - b) Crete
  - c) Rhodes
  - d) Samos
2. Flavian Amphitheater
  - a) London
  - b) Rome
  - c) Athens
  - d) Pompeii
3. Basilica Ulpia
  - a) Forum of Augustus
  - b) Forum of Trajan
  - c) Forum of Nerva
  - d) Forum of Peace
4. Lapis Niger
  - a) Via Appia
  - b) Campus Martius
  - c) Mons Capitolinum
  - d) Forum Romanum
5. Cloaca Maxima
  - a) Alba Longa
  - b) Janiculum Hill
  - c) Caelian Hill
  - d) Tiber River
6. Erechtheum
  - a) Athenian Acropolis
  - b) Alexandria
  - c) Pergamum
  - d) Turkey
7. Petra
  - a) Britain
  - b) Spain
  - c) Jordan
  - d) Iran
8. Lion Gate at Mycenae
  - a) Salamis
  - b) Corfu
  - c) Peloponnese
  - d) Sardinia
9. Stoa of Attalus in Athens
  - a) countryside
  - b) port
  - c) acropolis
  - d) agora
10. Diocletian's Palace
  - a) Ephesus
  - b) Byzantium
  - c) Capri
  - d) Split


Part 2: Please match the illustration with its name.

11. Which of these is the Arch of Constantine:




12. This view is the interior of the:

- a) Pantheon
- b) Basilica of Constantine
- c) Basilica Aemilia
- d) Curia



13. Below is the exterior of the:

- a) Temple of Venus and Roma
- b) Temple of Saturn
- c) Temple of Jupiter
- d) Curia

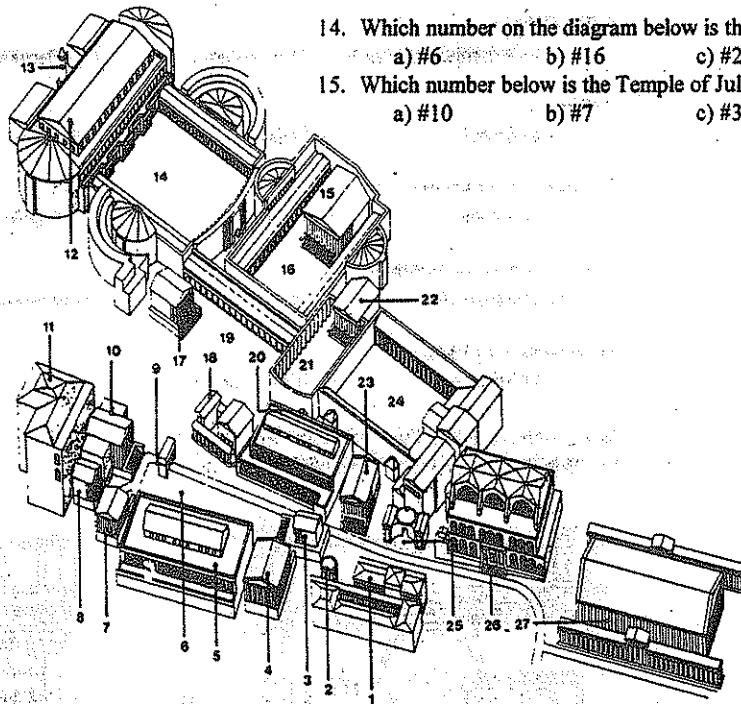


14. Which number on the diagram below is the Forum of Augustus?

- a) #6
- b) #16
- c) #24
- d) #14


15. Which number below is the Temple of Julius Caesar?

- a) #10
- b) #7
- c) #3
- d) #23



16. To visit the aqueduct pictured below, travel to:

- a) Spain
- b) France
- c) Italy
- d) Turkey





36. Mare Cantabricum  
a) The Wash      b) North Sea      c) Bay of Biscay      d) Lake Geneva

37. Helvetia  
a) France      b) Ireland      c) Spain      d) Switzerland

38. Praeneste  
a) Palestrina      b) Nimes      c) Reggio      d) Bologna

39. Mare Internum  
a) Mediterranean Sea      b) Ionian Sea      c) Caspian Sea      d) Persian Gulf

40. Sequana Flumen  
a) Seine River      b) Danube River      c) Rhine River      d) Loire River

41. Florentia  
a) Philadelphia      b) Florence      c) Palmyra      d) Pharsalus

42. Byzantium  
a) Istanbul      b) Beirut      c) Milan      d) York

43. Neapolis  
a) Sinope      b) Naxos      c) Naples      d) Nimes

44. Pontus Euxinus  
a) Black Sea      b) Propontis      c) Dead Sea      d) Red Sea

Part 4: Please choose the correct name for each location on the map (last page).

45. At Letter A:  
a) Britannia      b) Hibernia      c) Hispania      d) Germania

46. At Letter B:  
a) Murus Longus      b) Murus Hadriani      c) Pons Sublicius      d) Murus Servianus

47. At Letter C:  
a) Lugdunum      b) Lepcis Magna      c) Eboracum      d) Londinium

48. At Letter D:  
a) Britannia      b) Hispania      c) Armenia      d) Gallia Transalpina

49. At Letter E:  
a) Alexandria      b) Mt. Aetna      c) Amphipolis      d) Alesia

50. At Letter F:  
a) Lilybaeum      b) Provincia Romana      c) Campania      d) Sardinia

51. At Letter G:  
a) Roma      b) Capua      c) Florentia      d) Athens

52. At Letter H:  
a) Sicilia      b) Creta      c) Corsica      d) Cyprus

53. At Letter i.  
a) Pompeii      b) Brundisium      c) Narbo      d) Ostia

54. At Letter J:  
a) Tarentum      b) Neapolis      c) Syracuse      d) Tyrus

55. At Letter K:  
a) Athens      b) Corinth      c) Syracuse      d) Actium

56. At Letter L:  
a) Mare Ionium      b) Mare Tyrrhenum      c) Mare Erythraeum      d) Mare Libycum

- 57. At Letter M:  
a) Sparta                      b) Athens                      c) Mytilene                      d) Samothracia
- 58. At Letter N:  
a) Corinth                      b) Elis                      c) Olympia                      d) Athens
- 59. At Letter O:  
a) Neapolis                      b) Syracuse                      c) Pharsalus                      d) Mycenae
- 60. At Letter P:  
a) Pergamum                      b) Philippi                      c) Sardis                      d) Misenum
- 61. At Letter Q:  
a) Dyrrachium                      b) Ephesus                      c) Actium                      d) Corinth
- 62. At Letter R:  
a) Dacia                      b) Judaea                      c) Thessalia                      d) Bithynia
- 63. At Letter S:  
a) Thessalonica                      b) Nicopolis                      c) Hierosolyma                      d) Sardis
- 64. At Letter T:  
a) Euphrates                      b) Padus                      c) Nilus                      d) Tiberis
- 65. At Letter U:  
a) Memphis                      b) Alexandria                      c) Carthago                      d) Corcyra
- 66. At Letter V:  
a) Carthago                      b) Lilybaeum                      c) Tarentum                      d) Massilia
- 67. At Letter W:  
a) Rhegium                      b) Zama                      c) Syracuse                      d) Paestum
- 68. At Letter x:  
a) Thapsum                      b) Hadrumantum                      c) Utica                      d) Munda
- 69. At Letter Y:  
a) Iura Mons                      b) Alpes                      c) Montes Pyrenaei                      d) Mons Apeninus
- 70. At Letter Z:  
a) Cylcadés                      b) Insulae Baleares                      c) Pandateria                      d) Diomedeeae Insulae

Tie Breakers: The following questions will be scored only to break ties. Be sure to mark your answers at number 96-100.

- 96. How far is Ostia from Rome?  
a) 100 miles                      b) city limits touch                      c) 5 miles                      d) 20miles
- 97. Which encircles the most area?  
a) Aurelian Wall                      b) Servian Wall                      c) Circus Maximus                      d) Castra Praetoria
- 98. In which direction would you travel from Rome to Carthage?  
a) north                      b) south                      c) east                      d) west
- 99. Which was closest to the Curia?  
a) Templum Saturni                      b) Flaviium Amphitheatrum                      c) Basilica Aemilia                      d) Basilica Iulia
- 100. Which is northwest of Rome?  
a) Etruria                      b) Alba Longa                      c) Samnium                      d) Latium

Use the letters on this map to answer questions #45-70.

