

## 2014 NJCL Ancient Geography Test

Select the ancient name for the given modern name.

1. Greece
 

A. Galatia	B. Achaea	C. Campania	D. Moesia
------------	-----------	-------------	-----------
2. York
 

A. Singidunum	B. Nola	C. Massilia	D. Eboracum
---------------	---------	-------------	-------------
3. Izmit
 

A. Patavium	B. Massilia	C. Emesa	D. Nicomedia
-------------	-------------	----------	--------------
4. Marseille
 

A. Masada	B. Patavium	C. Moesia	D. Massilia
-----------	-------------	-----------	-------------
5. North Sea
 

A. Oceanus Hibernicus	B. Pontus Euxinus	C. Oceanus Germanicus	D. Propontis
-----------------------	-------------------	-----------------------	--------------
6. Black Sea
 

A. Mare Aegeum	B. Pontus Euxinus	C. Oceanus Gremanicus	D. Propontis
----------------	-------------------	-----------------------	--------------
7. Belgrade
 

A. Singidunum	B. Campania	C. Massilia	D. Cannae
---------------	-------------	-------------	-----------
8. Thames
 

A. Arnus	B. Bactis	C. Tamesis	D. Arnus
----------	-----------	------------	----------
9. Homs
 

A. Edessa	B. Cyrene	C. Epidaurus	D. Emesa
-----------	-----------	--------------	----------
10. Padua
 

A. Paestum	B. Ravenna	C. Syracuseae	D. Patavium
------------	------------	---------------	-------------
11. The towns of Placentia, Bononia, and Ariminum were located on what road?
 

A. Via Latina	B. Via Postumia	C. Via Flaminia	D. Via Aemilia
---------------	-----------------	-----------------	----------------
12. Which was NOT on the Via Appia?
 

A. Tarentum	B. Rhegium	C. Capua	D. Beneventum
-------------	------------	----------	---------------
13. Why was it important that the Via Appia eventually extend to Brundisium?
 

A. the volume of soldiers located in the region around it	B. it was the embarkation port to Greece	C. it was a major hub of major <u>viae</u>	D. its vulnerability and frequent attacks required instant military access
---	--	--	--
14. The road connecting London and York was:
 

A. Fosse Way	B. Watling Street	C. Ermine Street	D. Stane Street
--------------	-------------------	------------------	-----------------
15. When did concrete piers faced with masonry replace large masonry blocks in the construction of Roman bridges?
 

A. First Century B. C	B. First Century A. D.	C. Second Century A. D.	D. Third Century A. D.
-----------------------	------------------------	-------------------------	------------------------
16. The city of Rome ultimately had how many bridges crossing its river?
 

A. 6	B. 8	C. 10	D. 12
------	------	-------	-------
17. In Italy, milestones gave the distance:
 

A. between major cities	B. to Rome	C. to provincial capitals	D. to the nearest border
-------------------------	------------	---------------------------	--------------------------
18. Who erected in Rome the column in the Forum giving the distance to major towns of the empire?
 

A. Augustus	B. Hadrian	C. Caesar	D. Trajan
-------------	------------	-----------	-----------
19. The warehouse district in Rome was located just to the southwest of which hill?
 

A. Aventine	B. Janiculum	C. Palatine	D. Quirinal
-------------	--------------	-------------	-------------
20. Hispania Ulterior and Hispania Citerior were later reorganized into Lusitania, Baetica and:
 

A. Aquitania	B. Tarraconensis	C. Mauretania	D. Balearica
--------------	------------------	---------------	--------------

21. At which gate of Rome would you have seen the convergence of half a dozen aqueducts entering the city?  
 A. Praenestina                      B. Capena                      C. Appia                      D. Salaria
22. Which was NOT a major thermae in Rome?  
 A. Diocletian's                      B. Trajan's                      C. Caracalla's                      D. Claudius'
23. Which was NOT a minor bath complex in Rome?  
 A. Titus'                      B. Agrippa's                      C. Domitian's                      D. Nero's
24. Which was NOT the name of a theater or odeum in Rome?  
 A. Marcellus                      B. Balbus                      C. Pompey                      D. Cato
25. Which is NOT the correct pairing of a gate in the wall around Rome with the road that ran through it?  
 A. Porta Capena, Via Appia                      C. Porta Quirinalis, Via Aurelia  
 B. Porta Collina, Via Nomentana                      D. Porta Caelimontana, Via Metrovia
26. There was a large oval bulge in the Aurelian Wall between the Porta Asinaria and the Porta Labicana. What caused this?  
 A. the Thermae Helenianae                      C. the Ludus Magnus  
 B. Circus of Varianus                      D. the Amphitheatrum Castrensis
27. The *obeliscus Augusti* was used as the gnomon of what?  
 A. Horologium                      C. the Antonine Baths  
 B. the Circus of Gaius and Nero                      D. the Amphitheatrum Flavium
28. Which bridge connected the Campus Martius with the Vatican Fields?  
 A. Pons Neronianus                      B. Pons Aemilius                      C. Pons Valentinius                      D. Pons Fabricius
29. Leaving the Forum Romanum by the Forum of Augustus, one entered what neighborhood?  
 A. Subura                      B. Mons Testaceus                      C. Horti Sallustiani                      D. Janiculum
30. A small stretch of the Argiletum was turned into what?  
 A. Forum Transitorium                      B. Domus Publicus                      C. Aqua Claudia                      D. Circus Maxentius
31. What bridge would you have crossed to visit the Temple of Aesculapius?  
 A. Sublicius                      B. Aemilius                      C. Supplicius                      D. Fabricius
32. The Clivus Argentarius connected the Forum with:  
 A. the Circus Maximus                      B. the Tiber                      C. the Campus Martius                      D. the Colosseum
33. Most of Rome's bridges connected it with:  
 A. Vatican                      B. Transtiberim                      C. Ostia                      D. Milvium
34. To visit the Lacus Curtius, one went to:  
 A. the Colosseum                      B. the Forum Romanum                      C. Baths of Caracalla                      D. Naumachia Augusti
35. Located at the top of the Viminal Hill was:  
 A. Baths of Diocletian                      B. Saepta Iulia                      C. Hadrian's Mausoleum                      D. Temple of Claudius

Define the road terminology.

36. clivus  
 A. local road or track                      B. milestone                      C. foundation                      D. street on a slope
37. crepido  
 A. route                      B. track                      C. stone curb                      D. pavement
38. umbo  
 A. stone curb                      B. route                      C. alley                      D. path
39. agger  
 A. stepping stone                      B. path                      C. alley                      D. causeway forming a road
40. angiportus  
 A. stone curb                      B. alley                      C. street                      D. stepping stone
41. pervium  
 A. stepping stone                      B. stone curb                      C. passage                      D. foundation
42. limes  
 A. city street                      B. path, boundary                      C. cross-way                      D. pavement

43. miliarum  
 A. track                      B. footpath                      C. milestone                      D. stone curb

Select the ancient name for the given modern name.

44. Northern Italy  
 A. Gallia Comata                      B. Gallia Cisalpina                      C. Africa                      D. Gallia Narbonensis
45. Mediterranean Gaul  
 A. Gallia Comata                      B. Gallia Cisalpina                      C. Africa                      D. Gallia Narbonensis
46. Libya  
 A. Gallia Comata                      B. Gallia Cisalpina                      C. Africa                      D. Gallia Narbonensis
47. Northeastern France  
 A. Gallia Comata                      B. Gallia Cisalpina                      C. Africa                      D. Gallia Narbonensis

Identify the sites using Map A on page 6.

48. 24  
 A. Baths of Trajan                      B. Temple of Isis                      C. Crypta Balbi                      D. Temple of Claudius
49. 5  
 A. Circus Maximus                      B. Circus of Maxentius                      C. Circus of Nero                      D. Stadium of Domitian
50. A  
 A. Forum of Trajan                      B. Forum of Nerva                      C. Forum of Caesar                      D. Forum of Augustus
51. 13  
 A. Porticus of Octavia                      B. Shrine of Cloacina                      C. Saepta Iulia                      D. Column of Marcus Aurelius
52. 3  
 A. Rostra                      B. Mausoleum of Augustus                      C. Horologium of Augustus                      D. Porticus of Livia
53. 9  
 A. Temple of Serapis                      B. Temple of Juno                      C. Basilica Ulpia                      D. Arch of Constantine

Identify by number the location on the map of the named site.

54. Baths of Diocletian  
 A. 4                      B. 22                      C. 24                      D. 25
55. Theater of Marcellus  
 A. 6                      B. 11                      C. 12                      D. 16
56. Temple of Jupiter Optimus Maximus  
 A. 14                      B. 15                      C. 19                      D. 20
57. Pons Aemilius  
 A. a                      B. b                      C. d                      D. e
58. Temple of Venus and Rome  
 A. 4                      B. 7                      C. 18                      D. 20

59. Which of these was NOT on the Via Lata?  
 A. Ustrinum of Augustus                      C. the Pantheon  
 B. Ara Pacis                      D. Column of Marcus Aurelius
60. Which of these was located within the Servian Wall?  
 A. Baths of Diocletian                      C. the Baths of Caracalla  
 B. the Pantheon                      D. the Castra Praetoria
61. Which of these provinces was added during the life of Julius Caesar (100 B. C. to 44 B. C.) ?  
 A. Illyricum                      B. Bithynia                      C. Cilicia                      D. Africa

**Which province is described here?**

62. Occupied by Rome in 102 B.C. in an effort to deal with pirates, formally became a province in 72 B. C. Included Phrygia and Pisidia until these were returned to Asia  
A. Galatia                      B. Cilicia                      C. Syria                      D. Pontus
63. Originally reduced by Crassus in 29 B. C. , separated from Macedonia or Illyricum. Divided in two by Domitian, and further by Diocletian. Important river border.  
A. Noricum                      B. Raetia                      C. Moesia                      D. Pamphylia
64. Located in modern Italy, this region had been settled by Gauls before the Romans arrived. Bordered by the Po and the Alps.  
A. Gallia Transpadana      B. Illyricum                      C. Helvetia                      D. Narbonensis
65. One of Trajan's provincial additions, one of the few on the far side of the Danube, abandoned by Aurelian.  
A. Moesia                      B. Assyria                      C. Dalmatia                      D. Dacia
66. Bordered by Pontus, Pamphylia, Asia, etc. but by no coast.  
A. Bithynia                      B. Galatia                      C. Cappadocia                      D. Syria

**Which direction?**

67. Rome to Capua  
A. north                      B. south                      C. east                      D. west
68. Numidia to Africa  
A. north                      B. south                      C. east                      D. west
69. Crete to Cyrenaica  
A. north                      B. south                      C. east                      D. west
70. Achaea to Sicilia  
A. north                      B. south                      C. east                      D. west
71. Misenum to Cannae  
A. north                      B. south                      C. east                      D. west
72. Saguntum to Carthago Nova  
A. north                      B. south                      C. east                      D. west
73. Paestum to Brundisium  
A. north                      B. south                      C. east                      D. west
74. Athens to Ephesus  
A. north                      B. south                      C. east                      D. west
75. Corinth to Delphi  
A. north                      B. south                      C. east                      D. west
76. Halicarnassus to Rhodes  
A. north                      B. south                      C. east                      D. west

**Map B – Imperium Romanum**

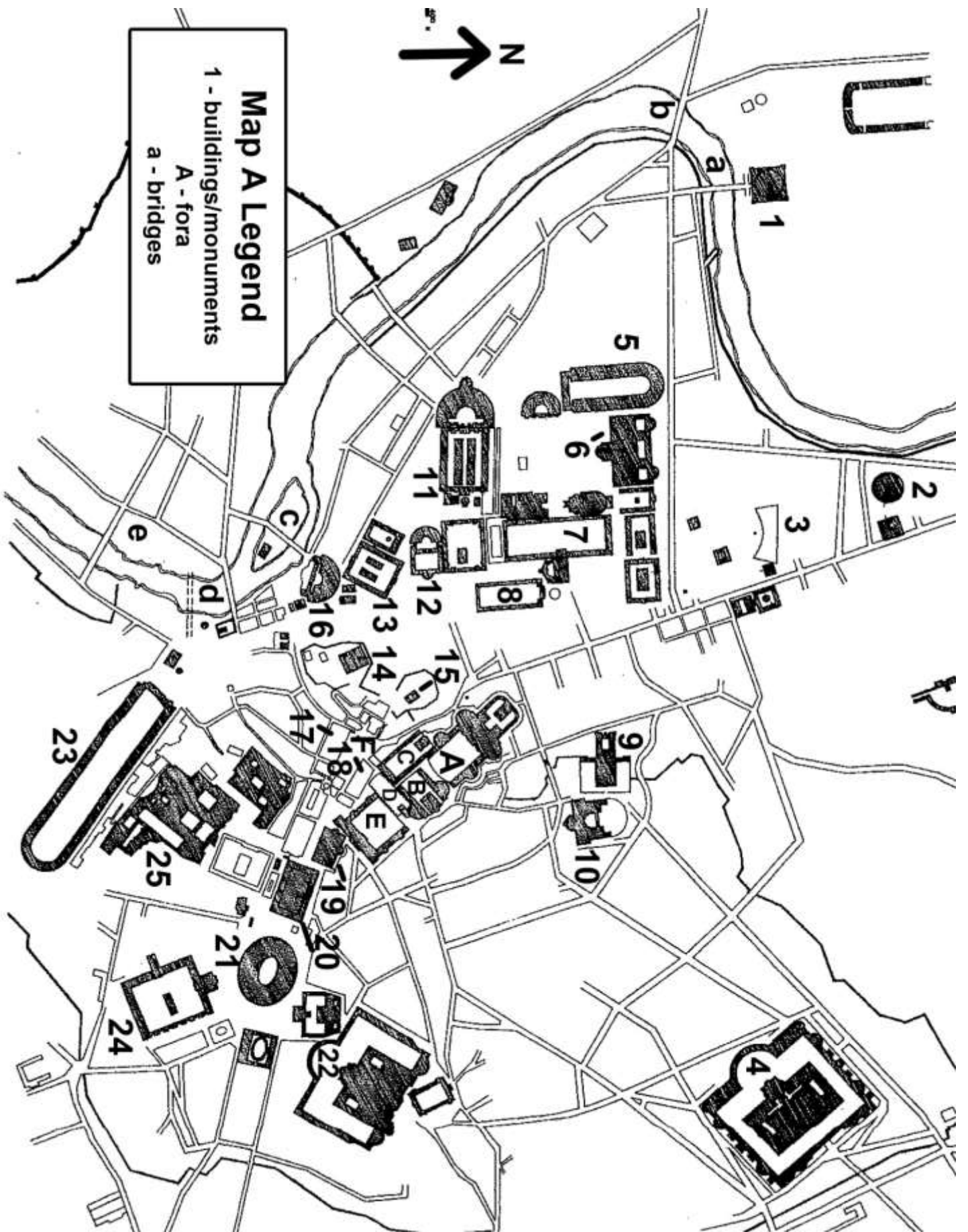
77. m  
A. Gallia Cisalpina      B. Helvetia                      C. Illyricum                      D. Lusitania
78. g  
A. Ionian Sea                      B. Adriatic Sea                      C. Black Sea                      D. Aegean Sea
79. 10  
A. Scythia                      B. Galatia                      C. Macedonia                      D. Phrygia
80. 18  
A. Alexandria                      B. Carthago                      C. Paestum                      D. Constantinople
81. 25  
A. Jerusalem                      B. Antiochia                      C. Ephesus                      D. Philippi

82. h  
 A. Rhine                      B. Danube                      C. Po                      D. Rhone
83. Troia  
 A. 11                      B. 24                      C. 23                      D. 17
84. Creta  
 A. p                      B. q                      C. r                      D. s
85. Atlas Mons  
 A. -A-                      B. n                      C. j                      D. t
- Map "C" – Provinces etc.
86. Thracia  
 A. 29                      B. 30                      C. 31                      D. 36
87. Bithynia  
 A. 36                      B. 28                      C. 38                      D. 27
88. Numidia  
 A. 18                      B. 33                      C. 52                      D. 22
89. Lugdunensis  
 A. 8                      B. 9                      C. 12                      D. 10
90. Britannia  
 A. 20                      B. 24                      C. 13                      D. 3
91. Arabia  
 A. 53                      B. 38                      C. 50                      D. 48
92. Mesopotamia  
 A. 54                      B. 54                      C. 50                      D. 27
93. 4  
 A. Mauretania                      B. Lusitania                      C. Dalmatia                      D. Hibernia
94. 24  
 A. Sicilia                      B. Sardinia                      C. Crete                      D. Rhodes
95. 29  
 A. Epirus                      B. Illyricum                      C. Dalmatia                      D. Pannonia
96. Which of these is not on a border of the Empire after the age of Trajan?  
 A. Mesopotamia                      B. Rhaetia                      C. Asia                      D. Germania
97. Which is farthest from Athens?  
 A. Pharsalus                      B. Actium                      C. Zela                      D. Philippi

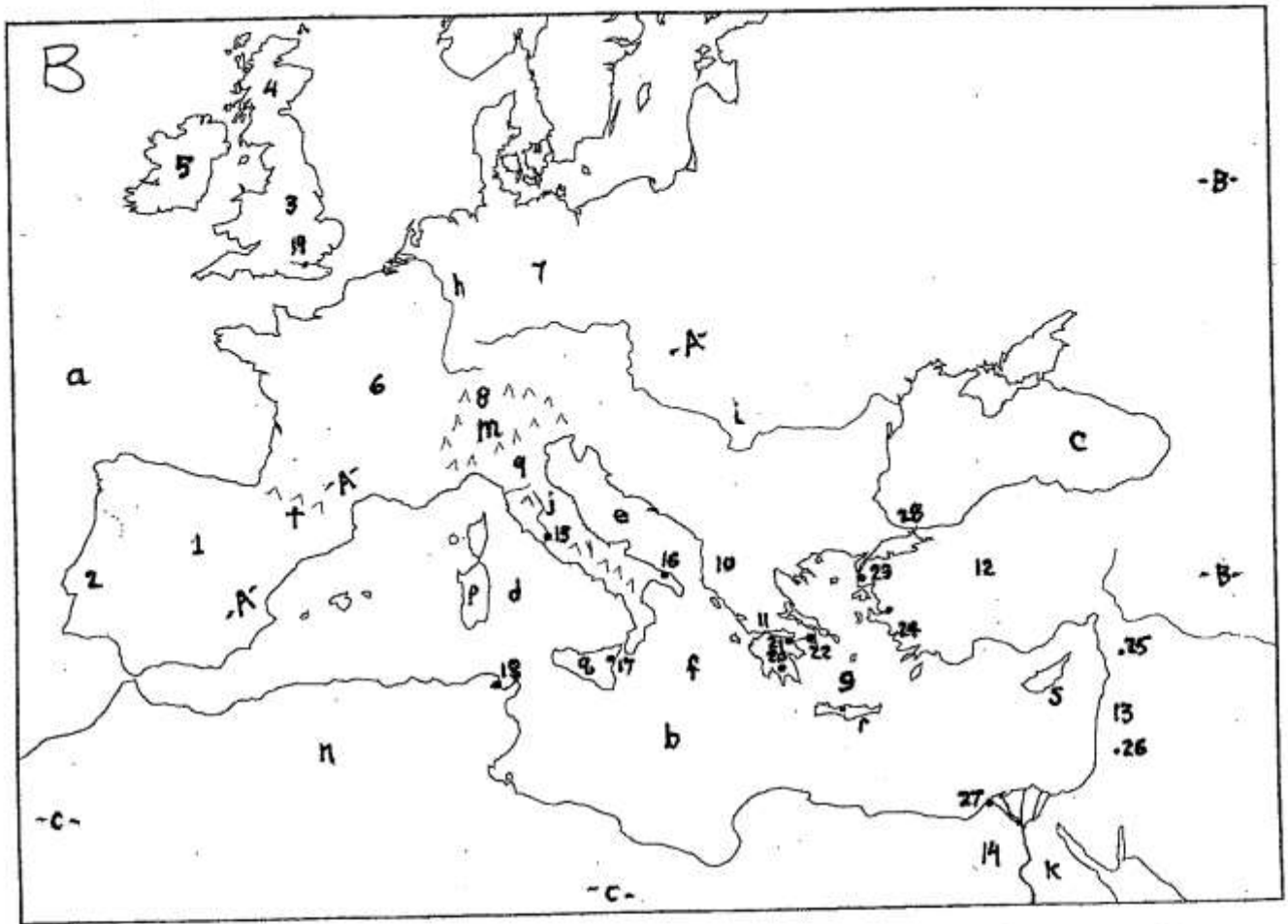
---

See the illustrations below the maps on pages 7-8 for these last three questions.

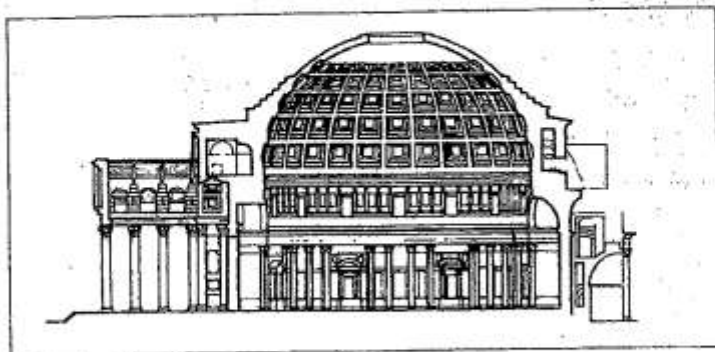
98. If this is a temple, it must be. . .  
 A. Apollo's                      B. the Pantheon                      C. Venus Genetrix                      D. Juno Moneta
99. If this is a temple in the Forum Romanum, it must be whose?  
 A. Romulus                      B. Vespasian                      C. Vesta                      D. Saturn
100. If this is a basilica in the Forum Romanum, it must be the Basilica. . . ?  
 A. Iulia                      B. Aemilia                      C. Ulpia                      D. Nova



**Map A Legend**  
 1 - buildings/monuments  
 A - fora  
 a - bridges

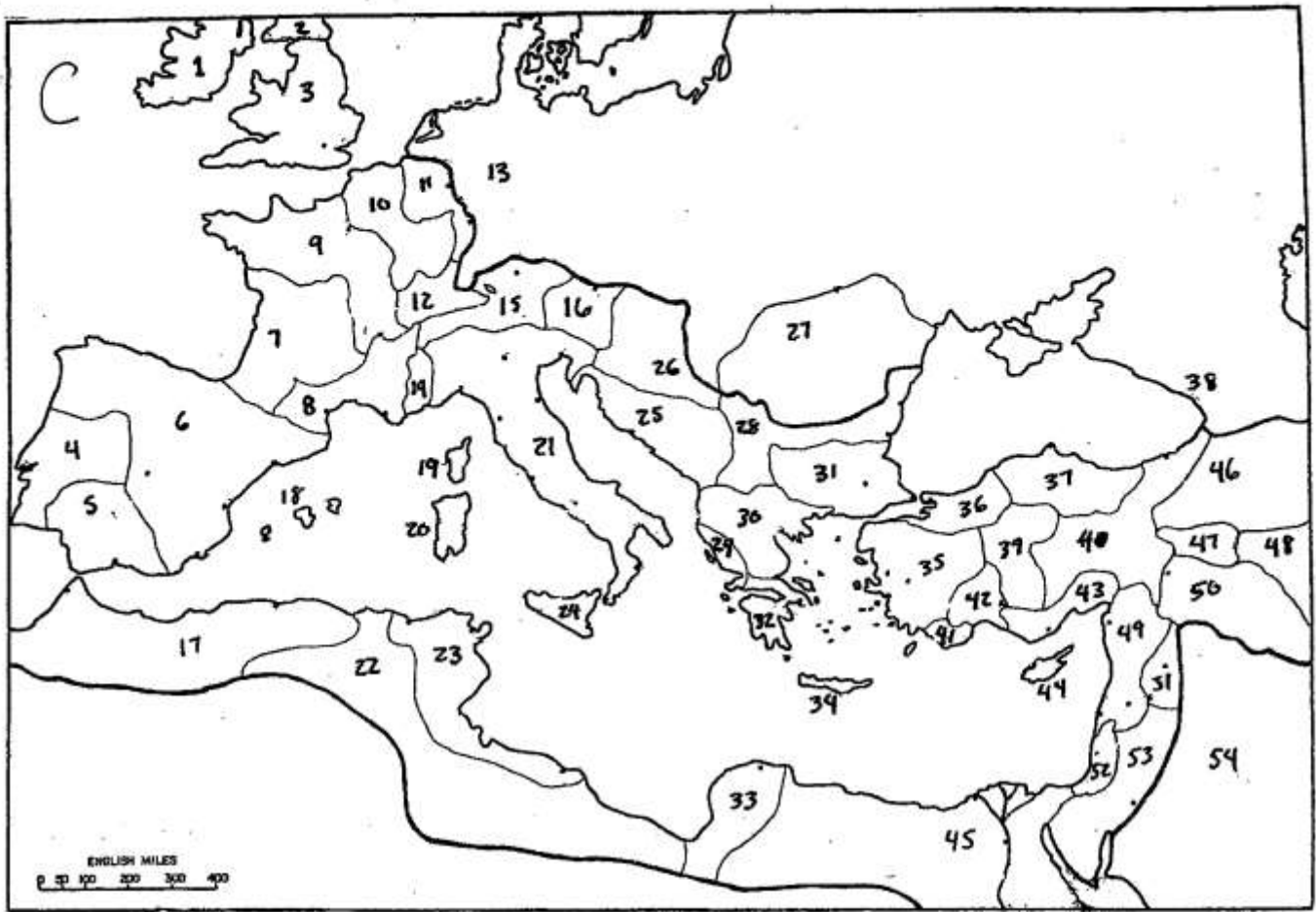


98.



99.





100.

