

# 2004 TSJCL Classical Monuments & Geography Test contest #16

## Part I. Where would you go to see each of the following?

1. Troy  
a) France                      b) Turkey                      c) Syria                      d) Armenia
2. Utica  
a) Pontus                      b) North Africa                      c) Mauretania                      d) Britannia
3. the Mausoleum of Augustus  
a) Campus Martius                      b) on the Via Aurelia                      c) along the Tiber                      d) near the Aventine
4. The Pantheon  
a) Forum Romanum                      b) Campus Martius                      c) Capitoline                      d) the Acropolis
5. Imperial palaces  
a) the Forum                      b) banks of the Tiber                      c) Palatine                      d) Campus Martius
6. Agora  
a) on the Via Aurelia                      b) on the Capitoline                      c) near the Acropolis                      d) across the Tiber
7. Saguntum  
a) Macedonia                      b) Hispania                      c) Pontus                      d) Illyricum
8. Scythia  
a) on the Adriatic                      b) on the Black Sea                      c) on the Rhine                      d) in Asia
9. Phrygia  
a) Graecia                      b) North Africa                      c) Italia                      d) Asia Minor
10. the Arch of Trajan  
a) Jerusalem                      b) Pompeii                      c) Mediolanum                      d) Beneventum
11. Via Flaminia  
a) north of Rome                      b) south of Rome                      c) east of Rome                      d) west of Rome
12. Pergamum  
a) Britain                      b) Gaul                      c) Asia                      d) Italia
13. Petra  
a) Greece                      b) Arabia                      c) Armenia                      d) Thrace
14. Rome's harbor  
a) Ostia                      b) Veii                      c) Praeneste                      d) Paestum
15. Tyre  
a) Cyrenaica                      b) Phoenicia                      c) Galatia                      d) Armenia
16. Bay of Naples harbor  
a) Ostia                      b) Puteoli                      c) Brundisium                      d) Alexandria
17. Cappadocia  
a) Turkey                      b) North Africa                      c) Greece                      d) Iraq
18. Aelia Capitolina  
a) Alexandria                      b) Beirut                      c) Byzantium                      d) Jerusalem
19. Euphrates  
a) Libya                      b) Romania                      c) Iraq                      d) Scythia
20. Ancestral home of Agamemnon  
a) Corinth                      b) Mycenaee                      c) Alexandria                      d) Messana

## Part 2: Match the illustration with its name (See illustrations at back.)

21. a) Temple of Castor                      b) Pantheon                      c) Baths of Trajan                      d) Temple of Vesta
22. This coin illustrates a shrine in the forum, The closing of whose doors represented peace in all corners of Roman territory; these doors were closed only four times in the first 800 years

of Rome's history.

- a) Temple of Saturn    b) Forum of Peace    c) Temple of Concord    d) Temple of Janus
23. These are drawings of extremely old monuments in the forum, rarely seen even in Roman times. The mysterious stones were covered and walled off to prevent pedestrian traffic.  
a) Lacus Curtius    b) Lapis Niger    c) Rostra    d) Comitium
24. This is the site plan of:  
a) Rome    b) Pompeii    c) Herculaneum    d) Ostia
25. a) Arch of Titus    b) Columbarium    c) Chalcidium    d) Temple of Antoninus
26. a) Colosseum    b) Temple of Augustus  
c) Theater of Marcellus    d) Portico of Octavia
27. a) Curia    b) Baths of Caracalla    c) Temple of Mars    d) Pons Cestius
28. a) Mausoleum of Augustus    b) Temple of Venus and Rome  
c) Circus of Gaius and Nero    d) Mausoleum of Hadrian
29. a) Temple of Castor    b) Temple of Saturn    c) Temple of Juppiter    d) Temple of Vespasian
30. a) Arch of Titus    b) Arch of Janus    c) Arch of Septimius    d) Arch of Constantine

**Part 3: Choose the best answer for each question that follows**

31. From Rome to Capua, take which road?  
a) Latina    b) Domitia    c) Flaminia    d) Aurelia
32. From Rome on the Via Flaminia, one travels through all of these but which?  
a) Ariminum    b) Narnia    c) Tarracina    d) Umbria
33. Which is most easterly:  
a) Sicilia    b) Creta    c) Cyprus    d) Sardinia
34. Which is not an island in the Augean Sea?  
a) Ithaca    b) Naxos    c) Tenedos    d) Rhodes
35. Roma is located in which region?  
a) Campania    b) Tuscany    c) Latium    d) Umbria
36. What is the name of the sea just to the west of Italy?  
a) Ionian    b) Adriatic    c) Tyrrhenian    d) Euxine
37. Which is not in North Africa?  
a) Zama    b) Carthago    c) Utica    d) Cilicia
38. The sea between Graecia and Asia Province is Mare...  
a) Adriaticum    b) Ionia    c) Aegeum    d) Cantabricum
39. Which is not an island in the Aegean Sea?  
a) Lemnos    b) Samos    c) Troizen    d) Naxos
40. Which is not one of the seven hills of Rome?  
a) Collatinus    b) Aventine    c) Caelian    d) Quirinal
41. Which is not in mainland Graecia?  
a) Laconia    b) Phthia    c) Attica    d) Lydia
42. Which is not in mainland Graecia?  
a) Phocis    b) Baetica    c) Epirus    d) Aetolia
43. Which is not in Africa?  
a) Magnesia    b) Numidia    c) Cyrenaica    d) Mauretania
44. Which is not an Etruscan city?  
a) Vulci    b) Clusium    c) Cosa    d) Tarentum
45. The Via Appia begins in Rome near the:  
a) Circus Maximus    b) Colosseum    c) Forum Romanum    d) Campus Martius
46. Which is between the Pontus Euxinus and Mare Caspium?  
a) Caucasus Mtns    b) Dacia    c) the Pyrenees Mtns    d) Sarmatia
47. Mantua is near what river?  
a) Tiber    b) Liris    c) Po    d) Rhone

48. Which of these is not in the Forum Romanum?  
 a) temple of Castor    b) shrine of Cloacina    c) temple of Apollo    d) Umbilicus Orbis

**Part 4: Choose the correct modern name for the ancient name.**

49. Helvetia  
 a) Belgium                      b) France                      c) Switzerland                      d) Poland
50. Mesopotamia  
 a) Turkey                      b) Palestine                      c) Iraq                      d) Georgia
51. Constantinople  
 a) Budapest                      b) Istanbul                      c) Baghdad                      d) Jerusalem
52. Caledonia  
 a) Albania                      b) Denmark                      c) Scotland                      d) Macedonia
53. Gallia Cisalpina  
 a) Switzerland                      b) Northern Italy                      c) France                      d) Belgium
54. Mare Nostrum  
 a) England                      b) Mediterranean                      c) Alps                      d) Sahara Desert
55. Lusitania  
 a) Algeria                      b) Slovakia                      c) Scotland                      d) Portugal

**Part 5: Choose the correct name for each location on the map. (See maps at back.)**

Map A

56. Erechtheum  
 a) B                      b) D                      c) C                      d) E
57. Parthenon  
 a) A                      b) B                      c) C                      d) E
58. Propylaea  
 a) G                      b) C                      c) D                      d) E
59. Temple of Athena Nike  
 a) A                      b) B                      c) C                      d) E

Map B


60. Circus Maximus is closest to which number?  
 a) 3                      b) 24                      c) 35                      d) 28
61. Temple of Jupiter Optimus Maximus Capitolinus  
 a) 6                      b) 10                      c) 21                      d) 20
62. Forum Boarum  
 a) 1                      b) 4                      c) 14                      d) 30
63. Number 19  
 a) Temple of Trajan    b) Basilica Maxentius    c) the Subura                      d) Palace of Augustus

Map C


64. Hibernia  
 a) 1                      b) 15                      c) 27                      d) 49
65. Asia  
 a) 30                      b) 23                      c) 35                      d) 52
66. Sicilia  
 a) 18                      b) 20                      c) 24                      d) 34
67. Aegyptia  
 a) 7                      b) 22                      c) 23                      d) 45




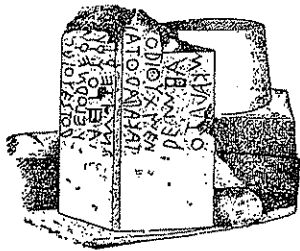
21.



22.

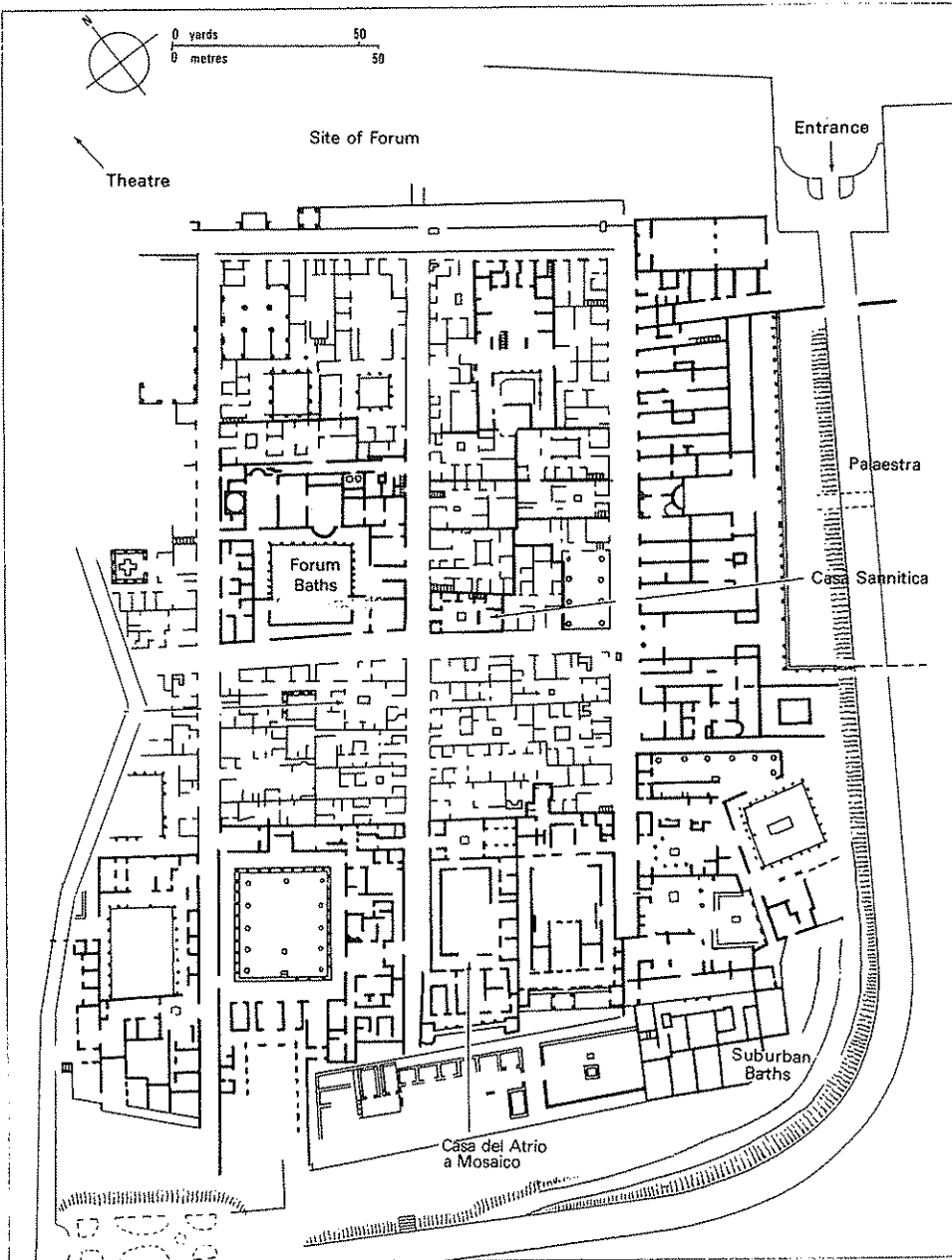


23.




THE CIPPUS AND INSCRIPTION.

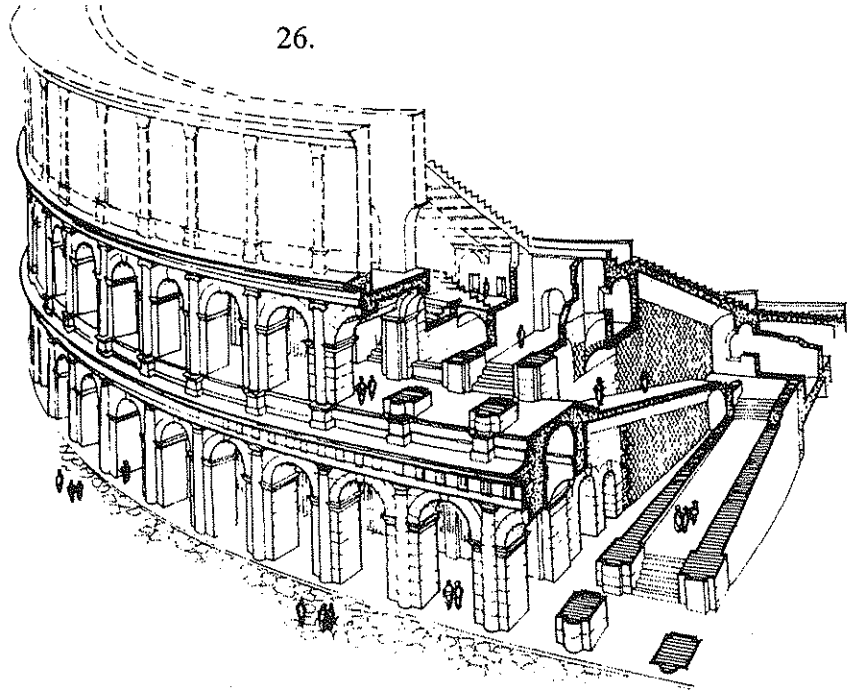
24.




25.




26.




27.




28.




29.



30.

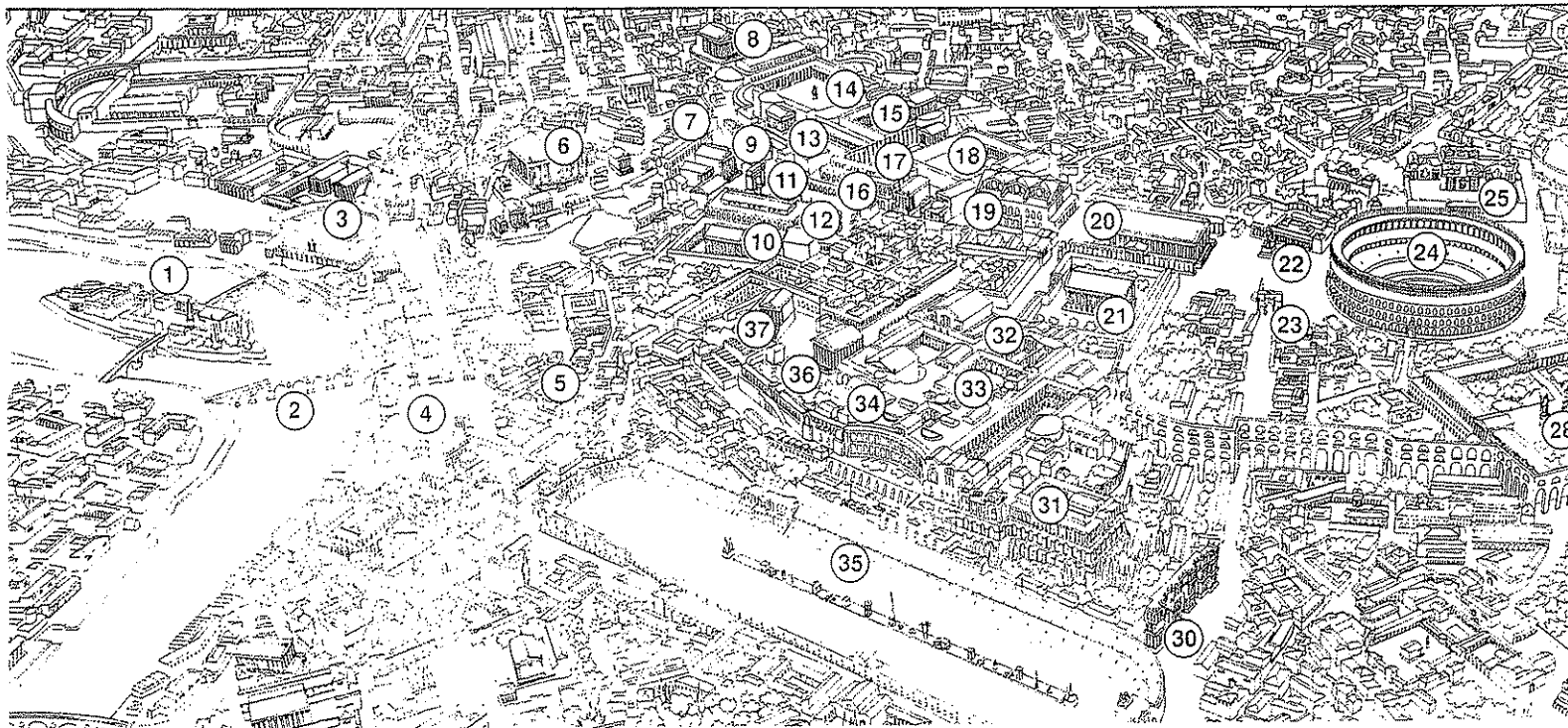


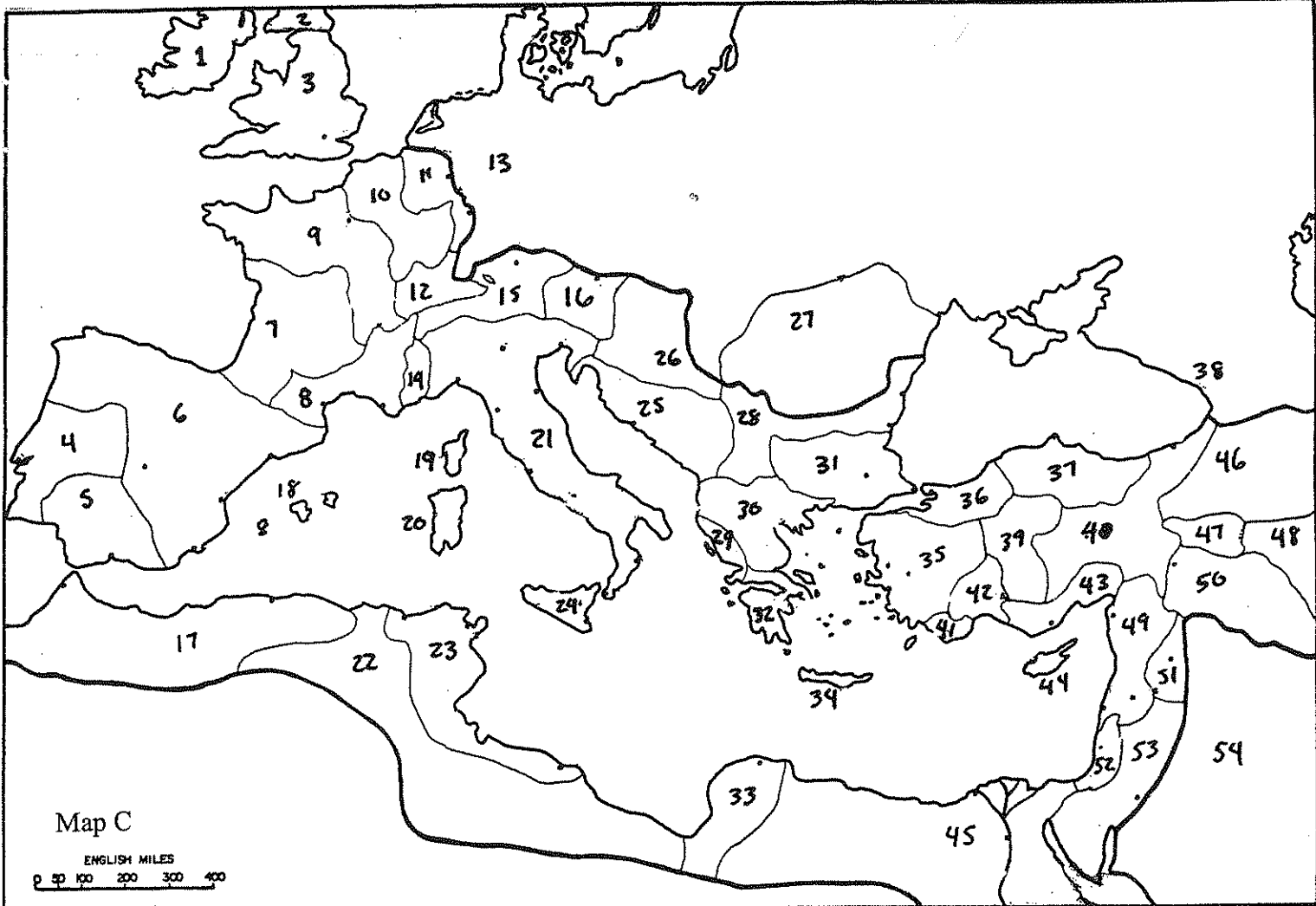
Map A



- 7 -

Map B





Map D

