

Texas State Junior Classical League 2003
Geography and Monuments of the Ancient World Test
contest code # 16

Please refer to Map A in order to answer questions #1-25.

1. Which of the following is nearest the site marked at #1 ?
a) Miletus b) Troy c) Agrinusae d) Argos
2. Which of the following is nearest the site marked at #2 ?
a) Cyclades Islands b) Sardinia & Corsica c) Rhodes d) Corcyra
3. Which of the following is nearest the site marked at #3 ?
a) Tyrrhenian b) Adriatic Sea c) Aegean Sea d) Mediterranean Sea
4. Which of the following is nearest the site marked at #4 ?
a) Mt. Olympus b) Cyprus c) Knossos d) Delphi
5. Which of the following is nearest the site marked at #5 ?
a) Mycenae b) Thebes c) Ephesus d) Thermopylai
6. Which of the following is nearest the site marked at #6 ?
a) Sparta b) Marathon c) Ithaca d) Byzantium
7. Which of the following is nearest the site marked at #7 ?
a) Pylos b) Mytilene c) Athens d) Tenedos
8. Which of the following is nearest the site marked at #8 ?
a) Thrace b) Illyria c) India d) Cappadocia
9. Which of the following is nearest the site marked at #9 ?
a) Alpheus River b) Acheron River c) Seine River d) Maeander River
10. Which of the following is nearest the site marked at #10 ?
a) Mantinea b) Thebes c) Alexandria d) Caesarea
11. Which of the following is nearest the site marked at #11 ?
a) Carthage b) Corinth c) Plataea d) Mycenae
12. Which of the following is nearest the site marked at #12 ?
a) Syracuse b) Capua c) Carthage d) Ostia
13. Which of the following is nearest the site marked at #13 ?
a) Thapsus b) Brundisium c) Misenum d) Narbo
14. Which of the following is nearest the site marked at #14 ?
a) Lilybaeum b) Tarentum c) Herculaneum d) Utica
15. Which of the following is nearest the site marked at #15 ?
a) Cumae b) Ostia c) Neapolis d) Capri
16. Which of the following is nearest the site marked at #16 ?
a) Padus River b) Danube River c) Tiber River d) Rhyndacus River
17. Which of the following is nearest the site marked at #17 ?
a) Jura Mountains b) Alps c) Apennine Mountains d) Pyrenees Mountains
18. Which of the following is nearest the site marked at #18 ?
a) Nile River b) Po River c) Jordan River d) Tiber River
19. Which of the following is nearest the site marked at #19 ?
a) Britannia b) Transalpine Gaul c) Hesperia d) Cilicia

20. Which of the following is nearest the site marked at #20 ?
 a) Galatia b) Narbonese Gaul c) Helvetia d) Propontis
21. Which of the following is nearest the site marked at #21 ?
 a) Sardinia b) Corsica c) Sicilia d) Rhodes
22. Which of the following is nearest the site marked at #22 ?
 a) Londinium b) Narbo c) Carthago Nova d) Corduba
23. Which of the following is nearest the site marked at #23 ?
 a) Via Flaminia b) Hadrian's Wall c) Mt. Aetna d) Stabiae
24. Which of the following is nearest the site marked at #24 ?
 a) Germania b) Belgica c) Hispania d) Pannonia
25. Which of the following is nearest the site marked at #25 ?
 a) Judaea b) Mauretania c) Cyrene d) Egypt

Please choose the best answer for each of the following questions.

26. Which island, the second-greatest sanctuary of Apollo, became the headquarters and treasury of the league formed by the Greeks in an alliance against Persia?
 a) Delos b) Thera c) Cos d) Crete
27. Which of the following is not an island?
 a) Chios b) Corsica c) Euxinus d) Sicilia
28. Which city was originally located on an island, but became part of the mainland after Alexander the Great built a mole out to it?
 a) Sidon b) Halicarnassus c) Tyre d) Miletus
29. Where was the statue known as the "Winged Victory of" found?
 a) Macedonia b) Samothrace c) Pergamum d) Pompeii
30. Which word best completes the analogy? Ostia:Rome:: _____:Athens
 a) Piraeus b) Eleusis c) Cumae d) Alexandria
31. Where was Tiberius' Villa Iovis located?
 a) Split b) Capri c) Rome d) Pompeii
32. Where did the defeat of Antony and Cleopatra at the hands of Octavian in 31B.C take place?
 a) Philippi b) Actium c) Pharsalus d) Munda
33. What is the name of the Volcano that erupted in A.D. 79 and destroyed Pompeii?
 a) Mt. Pentelicon b) Mt. Olympus c) Mt. Aetna d) Mt. Vesuvius
34. Which was the island home of the poetess Sappho?
 a) Aegospotami b) Lesbos c) Arcadia d) Chalcidice
35. Which major area was conquered by the Emperor Claudius?
 a) Germany b) Cappadocia c) Britain d) Egypt
36. Southern Italy and Sicily were also known by what name?
 a) Sicilia b) Magna Graecia c) Alexandria d) Italia Parva

Please pair each of the following and the choice with which it is most closely associated.

37. Colossus
 a) Rhodes b) Campus Martius c) Giza d) Babylonia
38. Crete
 a) Knossos b) Palatine c) Byzantium d) Cape Sounion
39. Leonidas
 a) Italia b) Thermopylae c) Olympia d) Marathon

40. Alexandria
a) Euphrates b) Rhenus c) Nilus d) Rhodanus
41. Britannia
a) Temple of Vesta b) Amphitheatrum Flavium c) Via Appia d) Aquae Sulis
42. Belgae, Aquitani, Celtae
a) Gallia b) Hibernia c) Dacia d) Hispania
43. Delphi
a) Apollo b) Demeter c) Zeus d) Athena
44. Salamis Island
a) Persian victory b) Athenian defeat c) Spartan defeat d) Persian defeat
45. Rome
a) Danube b) Tiber c) Rhone d) Thames
46. Julius Caesar
a) Thames b) Scamander c) Rubicon d) Po
47. Pompeii
a) Dalmatia b) Calabria c) Etruria d) Campania
48. Athens
a) Attica b) Lacedaemonia c) Arcadia d) Aetolia
49. Sparta
a) Euboea b) Pelopponesus c) Boeotia d) Chalcidice
50. Olympia
a) Lydia b) Locris c) Elis d) Macedonia

Please refer to **Diagram B** in order to answer the following questions.

51. The heart of which city is represented in this diagram?
a) Knossos b) Rome c) Corinth d) Alexandria
52. Nearest which letter is the Basilica Julia?
a) letter D b) letter F c) letter J d) Letter K
53. Nearest which letter is Forum Romanum?
a) Letter N b) Letter A c) letter E d) Letter L
54. Nearest which letter is the temple of Vesta?
a) letter P b) letter C c) letter M d) letter H
55. Nearest which letter is the Curia Julia?
a) letter N b) letter A c) letter K d) letter I
56. The Via Sacra runs between the buildings marked with which letters?
a) letters H & F b) letters B & C c) letters A & B d) letters G & J
57. Nearest which letter is the Temple of the deified Julius Caesar?
a) letter G b) letter P c) letter B d) letter F
58. Records were kept in the building marked with which letter?
a) letter I b) letter M c) letter A d) letter J
59. The senate met in the building marked with which letter?
a) letter A b) letter K c) letter D d) letter H
60. Which letter indicates the Forum of Augustus?
a) Letter E b) letter L c) letter N d) no letter marks it

Please refer to **Diagram C** in order to answer the following questions.

61. In what city are these buildings?
 - a) Athens
 - b) London
 - c) Petra
 - d) Carthage
62. What geological formation is represented in the picture?
 - a) acropolis
 - b) agora
 - c) necropolis
 - d) forum
63. Nearest which number is the Temple of Roma?
 - a) number 8
 - b) number 10
 - c) number 2
 - d) number 3
64. Nearest which number is the bronze statue of Athena?
 - a) number 8
 - b) number 9
 - c) number 6
 - d) number 3
65. Nearest which number is the Propylaea?
 - a) number 3
 - b) number 9
 - c) number 2
 - d) number 1
66. Nearest which number is the Temple of Athena Nike?
 - a) number 2
 - b) number 1
 - c) number 8
 - d) number 7
67. Nearest which number is the Arreforeion?
 - a) number 7
 - b) number 5
 - c) number 4
 - d) number 9
68. Nearest which number is the Pedistal of Agrippa?
 - a) number 2
 - b) number 3
 - c) number 6
 - d) number 10
69. Nearest which number is the Parthenon?
 - a) number 2
 - b) number 8
 - c) number 1
 - d) number 9
70. Nearest which number is the Erechtheion?
 - a) number 2
 - b) number 3
 - c) number 9
 - d) number 8

Tie-breakers: The following questions will be scored only to break ties.
Be sure to mark your answers in spaces 96-100.

Please refer to **Diagram D** in order to answer the following questions.

96. What is the name of this structure?
 - a) Theatre of Marcellus
 - b) Altar of the Vestals
 - c) Umbilicus
 - d) Ara Pacis
97. Where was the structure built?
 - a) Alexandria
 - b) Sparta
 - c) Rome
 - d) Athens
98. Of what material is the superstructure made?
 - a) cement
 - b) terracotta
 - c) marble
 - d) limestone
99. What is the theme of the frieze encircling the structure?
 - a) Panathenaea
 - b) Roman procession
 - c) Amazonomachy
 - d) Lapiths & Centaurs
100. In what style was this structure made?
 - a) British
 - b) Hellenic
 - c) Egyptian
 - d) Gothic

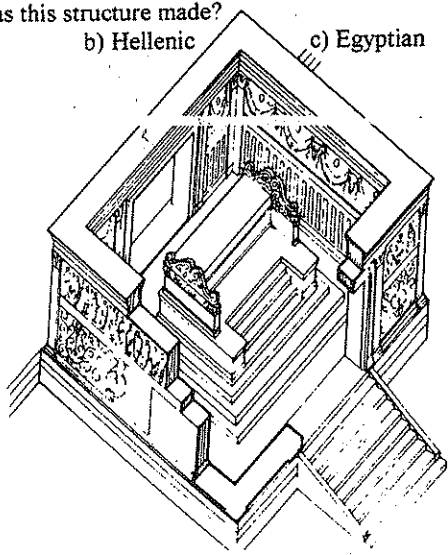
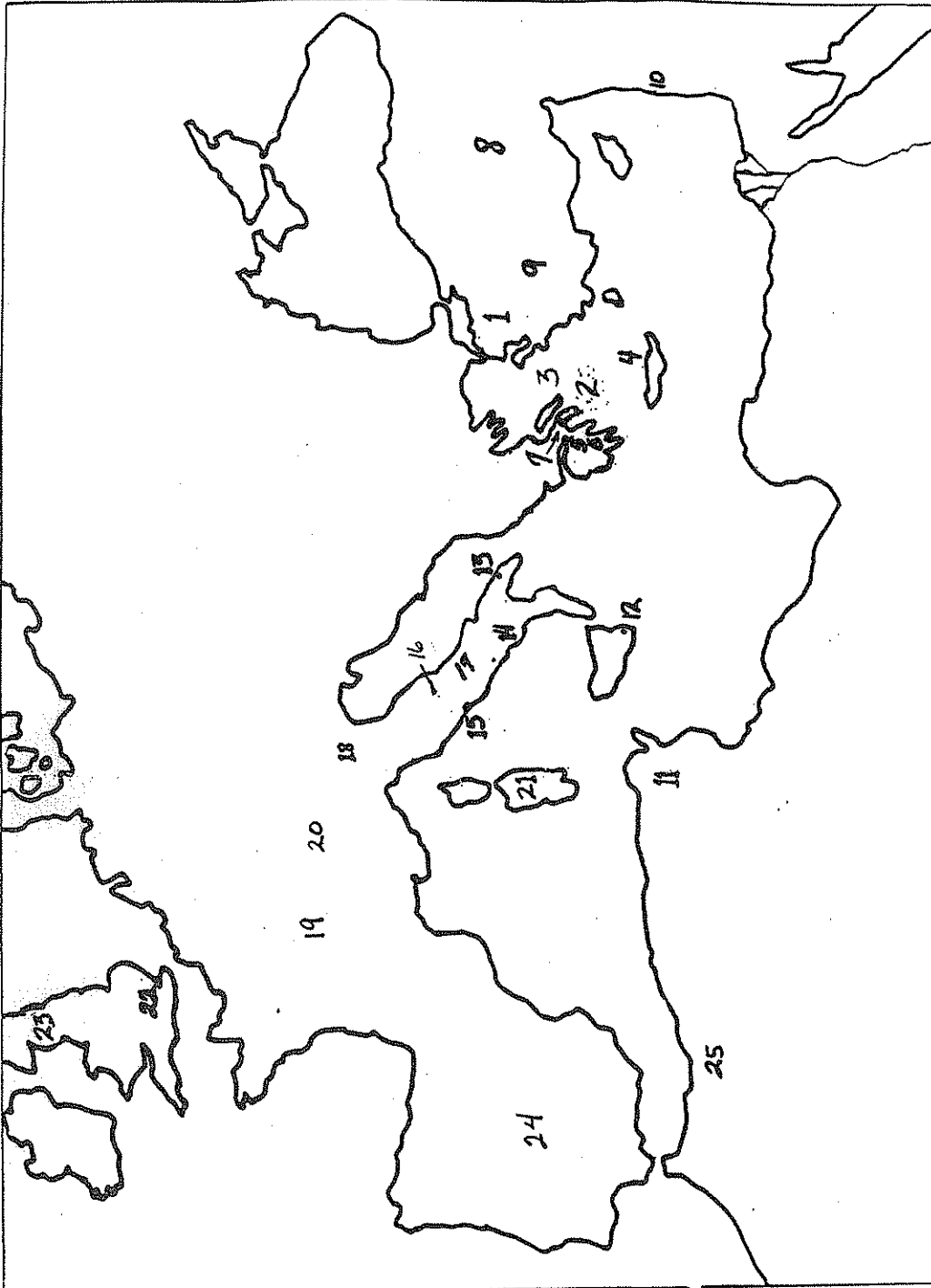


Diagram D

Map

Use the numbers on this map to answer questions #1-25

Map A



Map A

Diagram B

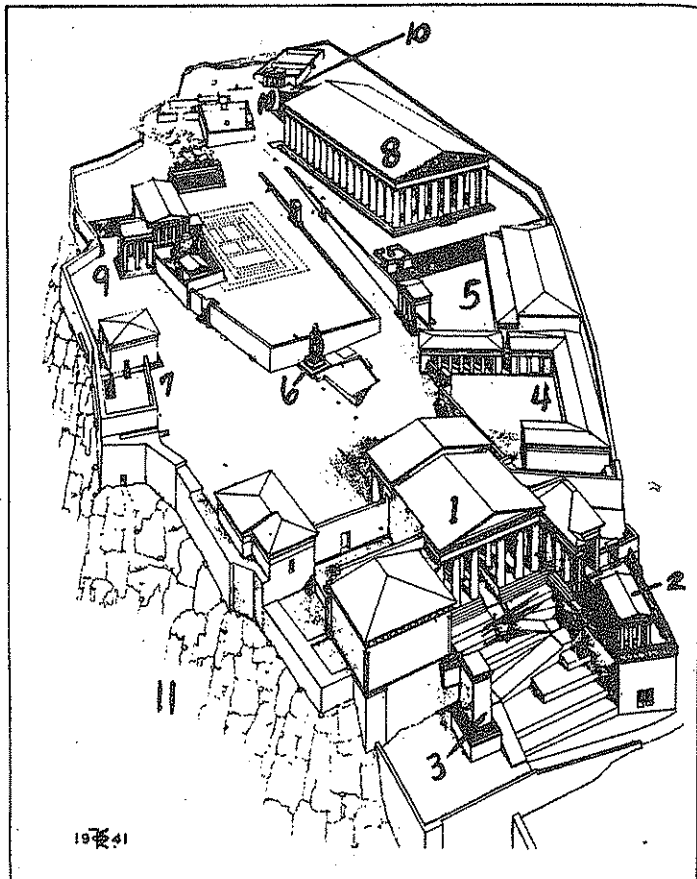



Diagram C