

**2001 National Junior Classical League
Ancient Geography Test**

1010**Section 1- General Geographical Knowledge**

1. Which region was farthest south?
A-Latium B-Etruria C-Campania D-Calabria
2. What region in Greece contained Thebes?
A-Attica B-Boeotia C-Laconia D-Ephyraea
3. What city served as the port of Rome?
A-Ostia B-Naples C-Piraeus D-Brundisium
4. What city served as the port of Athens?
A-Ostia B-Naples C-Piraeus D-Brundisium
5. What port in Greece sat opposite Brundisium?
A-Petras B-Dyrrhachium C-Leucapetra D-Apollonia
6. On what river was Rome located?
A-Danube B-Po C-Tiber D-Nile
7. What river formed the center of the Egyptian community?
A-Danube B-Po C-Tiber D-Nile
8. What modern nation was called *Helvetia* by the Romans?
A-Switzerland B-England C-Romania D-Libya
9. What modern nation was called *Lusitania* by the Romans?
A-Sweden B-Germany C-Portugal D-Morocco
10. What modern nation was called *Gallia* by the Romans?
A-Spain B-Austria C-France D-Ireland
11. What sea was called the *Pontus Euxinus* in ancient times?
A-Dead Sea B-Red Sea C-Aegean Sea D-Black Sea
12. What sea was called *Mare Nostrum* by the Romans?
A-Ionian Sea B-Mediterranean Sea C-Baltic Sea D-Black Sea

13. What was the name of the stream which the ancients believed to flow around all the lands of the earth?

- A-Atlantis B-Gibraltar C-Ocean D-Maeander

14. If Italy is a boot, then this region is the toe.

- A-Brutium B-Sabinia C-Campania D-Latium

15. Which island is northernmost?

- A-Crete B-Sicily C-Corsica D-Sardenia

16. What was the citadel of Athens?

- A-Agora B-Areopagus C-Acropolis D-Eleusis

17. What was the portion of Greece that lay south of the Gulf of Corinth?

- A-Euboea B-Peloponnesus C-Thrace D-Epirus

18. What was the principal city of Minoan Crete?

- A-Mycenae B-Corinth C-Knossos D-Syracuse

19. Which island belonged to the group known as the Cyclades?

- A-Sicily B-Delos C-Corsica D-Cyprus

20. The Athenians claimed to have colonized this region in western Asia Minor to save their culture from the invasion of the Dorians.

- A-Cappadocia B-Ionia C-Lydia D-Phrygia

21. What road ran through the Forum Romanum?

- A-Via Sacra B-Via Appia C-Via Egnatia D-Via Flaminia

22. What Roman road ran from Apollonia to Thessalonica?

- A-Via Sacra B-Via Appia C-Via Egnatia D-Via Flaminia

23. What road ran from Ancona, along the east coast of Italy, northwest to Placentia?

- A-Via Nova B-Via Domitia C-Via Aemilia D-Via Flaminia

24. What road ran southeast from Rome to Brundisium?

- A-Via Flaminia B-Via Valeria C-Via Sacra D-Via Appia

25. What road ran eastward from Rome to Corfinium, eventually joining up with the Via Aemilia?

- A-Via Domitia B-Via Appia C-Via Egnatia D-Via Valeria

Section 2- Ancient Greek Geography

Refer to Figure 1 to identify the specified region, city, or geographical feature.

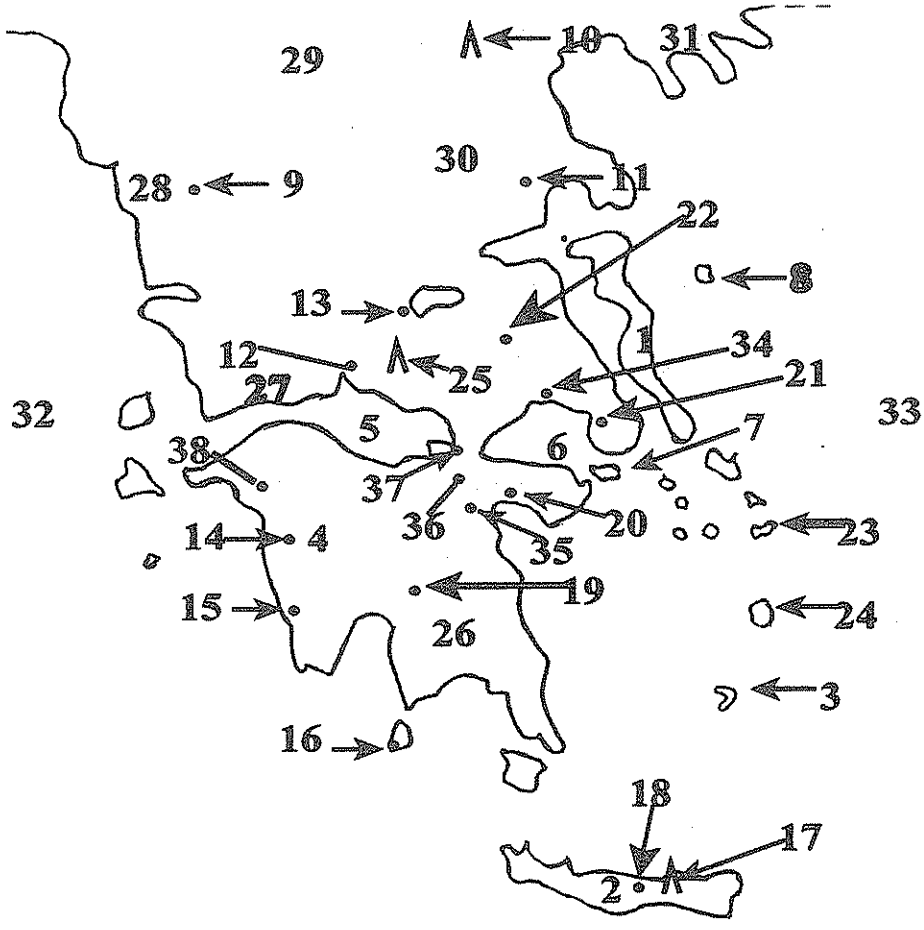


Figure 1- Map of Ancient Greece

Section 2- Ancient Greek Geography(continued)

26. Mt. Olympus	A-25	B-10	C-17	D-23
27. Delphi	A-14	B-4	C-10	D-12
28. Scyros	A-8	B-30	C-7	D-24
29. Thebes	A-13	B-11	C-19	D-22
30. Orchomenus	A-13	B-34	C-14	D-21
31. Pylos	A-19	B-16	C-15	D-14
32. Delos	A-23	B-7	C-3	D-2
33. Aegina	A-23	B-7	C-3	D-2
34. Thera	A-23	B-7	C-3	D-2
35. Athens	A-13	B-21	C-14	D-38
36. Mycenae	A-20	B-36	C-37	D-35
37. Corinth	A-20	B-36	C-37	D-35
38. Tiryns	A-20	B-36	C-37	D-35
39. Arcadia	A-4	B-29	C-27	D-31
40. Gulf of Corinth	A-5	B-6	C-33	D-32
41. Crete	A-23	B-3	C-2	D-8
42. Dodona	A-1	B-2	C-9	D-29
43. Euboea	A-26	B-28	C-13	D-1
44. Ionian Sea	A-33	B-5	C-6	D-32
45. Aegean Sea	A-33	B-5	C-6	D-32

Section 3- Ancient Italian Geography

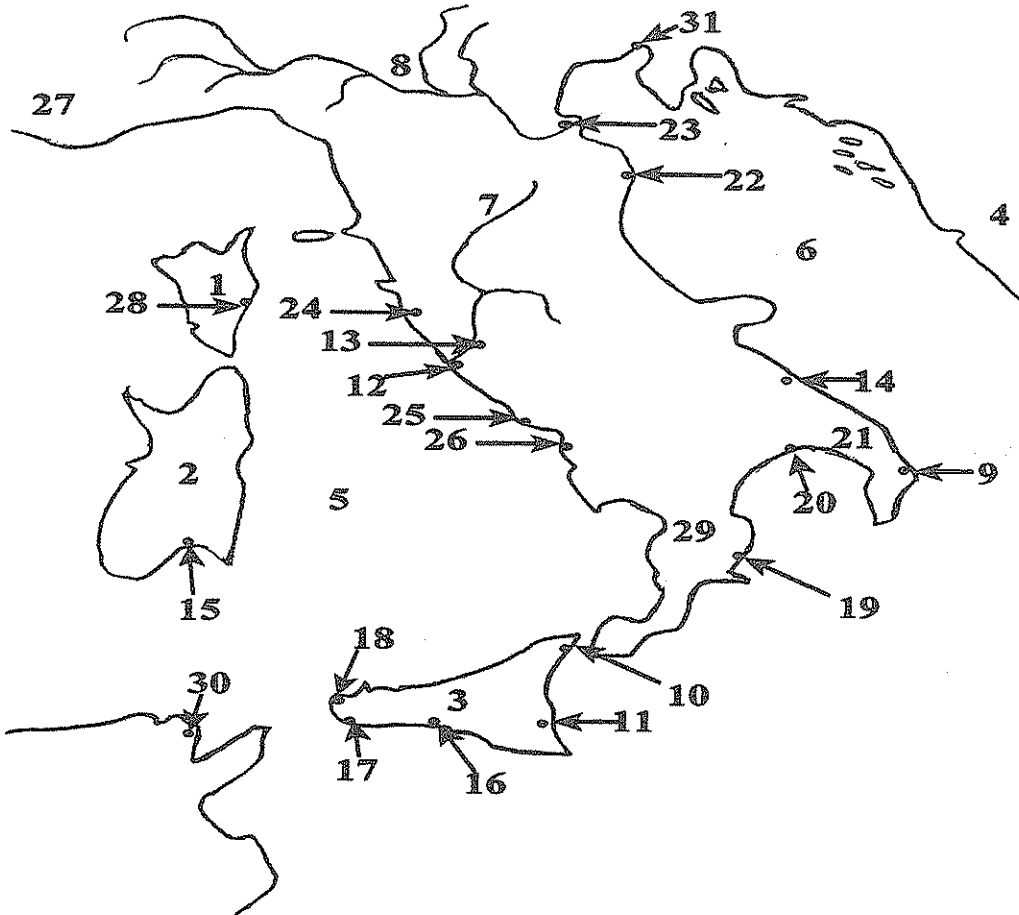


Figure 2- Map of Ancient Italy

Refer to Figure 2 to identify the specified region, city, or geographical feature.

Section 3- Ancient Italian Geography(continued)

46. Tiber River	A-8	B-7	C-20	D-5
47. Po River	A-8	B-7	C-20	D-29
48. Rome	A-13	B-12	C-24	D-26
49. Ostia	A-13	B-12	C-24	D-17
50. Cummae	A-26	B-25	C-16	D-21
51. Corsica	A-1	B-2	C-3	D-21
52. Sicily	A-1	B-2	C-3	D-4
53. Sardenia	A-1	B-2	C-3	D-4
54. Brundisium	A-11	B-18	C-20	D-9
55. Carthage	A-23	B-15	C-28	D-30
56. Adriatic Sea	A-20	B-6	C-5	D-8
57. Messana	A-16	B-10	C-11	D-17
58. Syracuse	A-23	B-10	C-11	D-17
59. Croton	A-20	B-14	C-19	D-30
60. Cannae	A-9	B-14	C-22	D-26
61. Tarrentum	A-9	B-25	C-20	D-19
62. Ravenna	A-22	B-27	C-12	D-24
63. Pompeii	A-24	B-16	C-25	D-26
64. Tarquinii	A-24	B-15	C-25	D-26
65. Tyrrhennian Sea	A-20	B-6	C-5	D-8

Section 4- Ancient European Geography

Refer to Figure 3 to identify the specified region, city, or geographical feature.

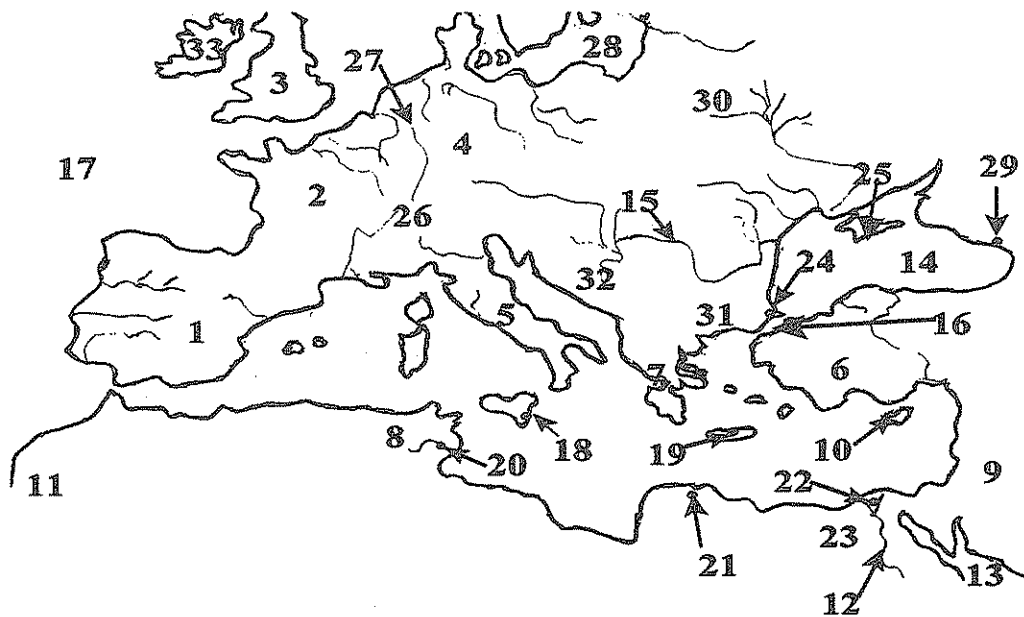


Figure 3- Map of Ancient Europe

Section 4- Ancient European Geography(continued)

66. Britannia	A-33	B-10	C-11	D-3
67. Hispania	A-11	B-2	C-1	D-4
68. Libya	A-8	B-11	C-30	D-12
69. Asia Minor	A-3	B-32	C-29	D-6
70. Greece	A-5	B-23	C-7	D-8
71. Italy	A-2	B-1	C-5	D-9
72. Gaul	A-1	B-2	C-4	D-30
73. Germania	A-3	B-4	C-11	D-9
74. Egypt	A-23	B-30	C-8	D-1
75. Mauretania	A-11	B-1	C-26	D-30
76. Helvetia	A-1	B-4	C-30	D-26
77. Danube River	A-27	B-20	C-12	D-15
78. Nile River	A-27	B-20	C-12	D-15
79. Lake Triton	A-27	B-20	C-12	D-15
80. Red Sea	A-28	B-13	C-20	D-14
81. Black Sea	A-28	B-13	C-17	D-14
82. Sea of Marmara	A-28	B-13	C-16	D-14
83. Cyprus	A-18	B-19	C-10	D-25
84. Thrace	A-30	B-31	C-32	D-11
85. Epirus	A-30	B-31	C-32	D-11
86. Alexandria	A-21	B-25	C-22	D-24
87. Constantinople	A-29	B-25	C-18	D-24
88. Knossos	A-19	B-18	C-29	D-22
89. Rhine River	A-27	B-20	C-12	D-15
90. Syracuse	A-25	B-29	C-18	D-22

Section 5- The City, Rome

91. What temple was located in the *Forum Augusti*?
 A-Temple of Venuus Victrix B-Temple of Venus Genetrix
 C-Temple of Mars Ultor D-Temple of Castor and Pollux
92. What temple was located in the *Forum Julium*?
 A-Temple of Venuus Victrix B-Temple of Venus Genetrix
 C-Temple of Mars Ultor D-Temple of Castor and Pollux
93. Which Roman hill was located to the west of the Tiber?
 A-Janiculum B-Capitoline C-Paletine D-Aventine
94. What temple was located farthest from the *Rostra*?
 A-Temple of Antoninus and Faustina
 B-Templum Divi Julii
 C-Temple of Vesta
 D-Temple of Saturn
95. Whose triumphal arch was not located in the *Forum Romanum*?
 A-Titus B-Tiberius C-Constantine D-Augustus

Section 6- Mountains and Passes

96. What mountain range formed the spine of Italy?
 A-Alps B-Appenines C-Atlas D-Balkans
97. What volcanic mountain in Southern Italy erupted in 79 AD?
 A-Ida B-Parnassus C-Latmus D-Vesuvius
98. What mountain range was located in northwest Africa?
 A-Alps B-Appenines C-Atlas D-Balkans
99. What mountain range was located along the northern border of Italy?
 A-Alps B-Appenines C-Atlas D-Balkans
100. What pass in western Greece, critical to access of the region, was the site of two major battles in Classical times?
 A-Algidus B-Leucapetra C-Thermopylae D-Tempe

