

1017

**NATIONAL JUNIOR CLASSICAL LEAGUE**  
**ANCIENT GEOGRAPHY 1999**  
**CHOOSE THE BEST ANSWER FOR EACH OF THESE QUESTIONS Page One**

1. This region of northern Greece is the home of Alexander the Great  
A. Achaea                      B. Cyrene                      C. Macedonia                      D. Peloponnes
2. This province of Italy contains Rome and its surrounding towns  
A. Apuglia                      B. Campagna                      C. Latium                      D. Tuscany
3. Hadrian built a wall across the north of England between these two modern towns  
A. Carlisle and Newcastle                      B. Dover and Oxford  
C. Manchester and York                      D. Salisbury and Canterbury
4. Her tomb is found on the Appian Way  
A. Agripinna                      B. Cecilia Metella                      C. Claudia Lateranus                      D. Drusila Minor
5. This road led from Rome to Ariminum (Rimini)  
A. Via Appia                      B. Via Aurelia                      C. Via Flaminia                      D. Via Praenestina
6. His pyramid tomb is near the Porta San Paolo  
A. Aemelianus Scipio                      B. Caius Cestus                      C. Marcus Aurelius                      D. Nero
7. This market for grain, wine, and oil lay between the Capitoline and the Esquiline hills  
A. Augustus                      B. Claudius                      C. Marcus Aurelius                      D. Trajan
8. In the area of the Velabro, one can find an arch with this name  
A. Apollo                      B. Janus                      C. Jupiter                      D. Mercury
9. The Milivian bridge is located where in relation to the center of Rome  
A. east                      B. north                      C. south                      D. west
10. The Villa Adriano lies where in relation to Rome  
A. east                      B. north                      C. south                      D. west
11. The tomb of this family lies beside the Porta San Sebastiano  
A. Brutii                      B. Flavius                      C. Julian                      D. Scipio
12. This river flows through Rome  
A. Metaurus                      B. Po                      C. Rubicon                      D. Tiber
13. When Caesar wrote "Gallia est omnia tres partes", he was referring primarily to this  
A. Austria                      B. France                      C. Hungary                      D. Romania
14. Which of the gates of modern Rome was the old Porta Appia in the Aurelian Wall  
A. Capena                      B. Latina                      C. Pia                      D. Sebastiano

# NATIONAL JUNIOR CLASSICAL LEAGUE

## ANCIENT GEOGRAPHY 1999

Page Two

15. This is NOT a former Roman town in Britain  
A. Carpentras      B. Chester      C. Cirencester      D. St. Albans
16. Excellent Etruscan tombs have been uncovered here  
A. Benevento      B. Cerveteri      C. Milan      D. Taranto
17. The Appian Way started at this point in modern Rome  
A. Ara Pacis      B. Column of Phocas      C. Largo Argentina      D. Porta Capena
18. In Rome, this famous Roman had a column, now found in the piazza Colonna  
A. Augustus      B. Julius Caesar      C. Marcus Aurelius      D. Trajan
19. The Portico of Octavia lies here  
A. foot of Capitoline      B. on Esquiline      C. on Palatine      D. near Colosseum
20. This provinces or area is NOT found in modern Turkey  
A. Caria      B. Cappadocia      C. Galatia      D. Illyria
21. The Via Presnestina left Rome by this modern gate  
A. Aurelia      B. Flaminia      C. Maggiore      D. Sebastiano
22. The Domus Aurea was built primarily on this hill of Rome  
A. Aventine      B. Esquiline      C. Quirinal      D. Viminal
23. The temple of Claudius was built on this hill of Rome  
A. Aventine      B. Caelian      C. Capitoline      D. Esquiline
24. The ruins of the temple of Hadrian are closest to this monument in Rome  
A. Ara Pacis      B. Colosseum      C. Castel Sant'Angelo      D. Pantheon
25. This is the name for the low lying hills outside of Rome  
A. Alban      B. Amalfi      C. Cotswolds      D. Vomero
26. One would one find the Arx on this hill of Rome  
A. Aventine      B. Capitoline      C. Esquiline      D. Palatine
27. The town of Troezen, home of Theseus, was located here in Greece  
A. Argolid      B. Chaldice      C. Isthmus      D. Peloponnes
28. Alexander and his father Philip came from this part of northern Greece  
A. Arcadia      B. Boeotia      C. Macedonia      D. Thessaly
29. Which of these cities is located farthest from the others  
A. Beneventum      B. Capua      C. Naples      D. Taranto

# NATIONAL JUNIOR CLASSICAL LEAGUE ANCIENT GEOGRAPHY 1999

Page Three

30. Which one of these cities is located farthest from the others  
A. Caesarea      B. Pergamon      C. Sidon      D. Tyre
31. Which one of these cities is located farthest from the others  
A. Pella      B. Philippi      C. Sparta      D. Thessalonika
32. A theatre and the ruins of a temple to Zeus are at Dodona, which is located in  
A. Arcadia      B. Epirus      C. Laconia      D. Thessaly
33. The Persians were defeated in a naval battle at Salamis, which is near  
A. Athens      B. Corinth      C. Sparta      D. Thebes
34. The Sacra Via ran through this  
A. Campus Martius      B. Forum      C. Janiculum      D. Trastevere
35. Interesting and intriguing Macedonian tombs were found here  
A. Calydon      B. Nauplion      C. Ioannes      D. Vergina
36. The mountain chain that runs down the length of Italy is known as  
A. Apennines      B. Caucasus      C. Pyrenees      D. Sudetan Mts.
37. This hill is located in Athens  
A. Mt. Ararat      B. Mt. Dicte      C. Mt. Eryx      D. Mt. Lycabettus
38. This large island is located to the northeast of Athens  
A. Cephallonia      B. Corfu      C. Euboea      D. Rhodes
39. The Theatre of Pompey is closest to this monument in Rome  
A. Castel Sant'Angelo      B. Largo Argentina      C. Pantheon      D. Tomb of Augustus
40. The Mamertine Prison is adjacent to this  
A. Colosseum      B. Forum      C. Ghetto      D. Ponte Rotto
41. Which of these is NOT in the Forum Romanum  
A. Rostra      B. Temple of Aesculapius      C. Temple of Vespasian      D. Temple of Saturn
42. Which of these is NOT in the Forum Roman  
A. Basilica Julia      B. Castro Praetorio      C. Regia      D. Temple of Castor/Pollux
43. Which of these is believed to be located on the site of the Ghetto of Rome  
A. Circus of Gaius      B. Circus of Flaminius      C. Spring of Camenae      D. Sundial of Augustus
44. This city has fabulous surviving ruins, including an impressive library  
A. Ephesus      B. Olympia      C. Paestum      D. Trier

# NATIONAL JUNIOR CLASSICAL LEAGUE

## ANCIENT GEOGRAPHY 1999

Page Four

45. The superiority of the Roman legion over the Greek phalanx was shown at Pydna, in  
A. Arcadia      B. Boeotia      C. Macedonia      D. Thessaly
46. The Roman town of Puteoli is located near  
A. Beneventum      B. Civitavecchia      C. Naples      D. Ostia
47. This Roman province was located in western Austria, eastern Switzerland, & Bavaria  
A. Moesia      B. Noricum      C. Pannonia      D. Raetia
48. This city was known as Philadelphieia  
A. Amman      B. Antioch      C. Damascus      D. Haifa
49. The area of northern Italy was known as  
A. Aquitannia      B. Calabria      C. Cisalpine Gaul      D. Transalpine Gaul
50. This hilltop Etruscan town was located outside of modern Florence  
A. Comum      B. Faesulae      C. Luceria      D. Rhegium
51. Which of these cities is farthest from Rome  
A. Alexandria      B. Carthage      C. Leptis Magna      D. Syracuse
52. Which of these cities is farthest from the others  
A. Colchester      B. Dover      C. London      D. York
53. Which of these cities is farthest from the others  
A. Basel      B. Cologne      C. Dubrovnik      D. Trier
54. This region was located in the former Yugoslavia  
A. Bohemia      B. Dalmatia      C. Moravia      D. Silesia
55. A person who sailed from Athens to London would not pass by this country  
A. Algeria      B. Belgium      C. Italy      D. Portugal
56. A person walking the shortest distance from Paris to Romania would not go thru here  
A. Austria      B. Germany      C. Hungary      D. Netherlands
57. This region is NOT found in modern Turkey  
A. Albion      B. Bithynia      C. Lycia      D. Paphlagonia
58. This region is NOT found in modern Turkey  
A. Laconia      B. Mysia      C. Pamphilia      D. Pontus
59. This city is NOT found on the Black Sea  
A. Aquincum      B. Chersonesus      C. Sinope      D. Trapezus

**NATIONAL JUNIOR CLASSICAL LEAGUE**  
**ANCIENT GEOGRAPHY 1999**

Page Five

60. This was a major city in the Etruscan world  
A. Aventicum      B. Carnuntum      C. Moguntiacum      D. Volterra
61. This is a principal river in the Tuscany region  
A. Arnus      B. Baetis      C. Moselle      D. Rhodannus
62. This region lies along the instep of the "boot" of Italy  
A. Apuglia      B. Liguria      C. Lombardy      D. Molise
63. This mountain range is found in Turkey  
A. Atlas      B. Erymanthus      C. Taurus      D. Urals
64. These famous marshes lie about 35 miles south of Rome; now they are drained  
A. Caudine      B. Fucine      C. Lerna      D. Pontine
65. This Roman resort city on the Tyrrhenian coast lies 90 miles southwest of Rome  
A. Calusium      B. Formiae      C. Pyrgi      D. Vetulonia
66. This province was located in the south of France  
A. Belgica      B. Cisalpine      C. Illyria      D. Narbonensis
67. A person traveling from Lugundum to Tomis would NOT pass through this province  
A. Dacia      B. Noricum      C. Mauretania      D. Pannonia
68. A person traveling from Gades to Singidunum by land would pass through here  
A. Mauretania      B. Numantia      C. Numidia      D. Sarmatia
69. A person going from Thebes to Nauplion by land would NOT pass this town  
A. Argos      B. Mycenae      C. Pylos      D. Tiryns
70. Which of these is NOT a member of the Cycladic island group  
A. Lemnos      B. Mykonos      C. Naxos      D. Paros

**MAP SKILLS**

**CHOOSE THE BEST ANSWER**

**USE MAP ALPHA FOR QUESTIONS 71 - 78**

71. Which one of these choices is Rome  
A. 102      B. 109      C. 118      D. 120
72. Which one of these choices is Brundisium  
A. 105      B. 111      C. 114      D. 118
73. Which one of these choices is Metapontum  
A. 105      B. 110      C. 111      D. 118
74. Which one of these choices is Beneventum  
A. 102      B. 105      C. 110      D. 118

# NATIONAL JUNIOR CLASSICAL LEAGUE ANCIENT GEOGRAPHY 1999

Page Six

75. Which one of these choices is Ravenna

- A. 103                      B. 105                      C. 110                      D. 117

76. Which one of these choices is Pisa

- A. 103                      B. 109                      C. 114                      D. 116

77. Which one of these choices is Misenum

- A. 101                      B. 103                      C. 113                      D. 116

78. Which one of these choices is Split

- A. 103                      B. 113                      C. 116                      D. 117

## MAP SKILLS FOR QUESTIONS 79 - 89, USE MAP BETA

79. Which one of these choices is Leptis Magna

- A. 208                      B. 221                      C. 243                      D. 264

80. Which one of these choices is Tyre

- A. 208                      B. 221                      C. 249                      D. 260

81. Which one of these choices is Halicarnassus

- A. 208                      B. 219                      C. 249                      D. 257

82. Which one of these choices is Utica

- A. 209                      B. 221                      C. 243                      D. 264

83. Which one of these choices is Sardinia

- A. 230                      B. 240                      C. 250                      D. 255

84. Which one of these choices is Corsica

- A. 230                      B. 240                      C. 250                      D. 255

85. Which one of these choices is Hispania

- A. 212                      B. 217                      C. 238                      D. 242

86. Which one of these choices is Algeria

- A. 212                      B. 217                      C. 238                      D. 247

87. Which one of these choices is Cyprus

- A. 210                      B. 240                      C. 250                      D. 255

88. Which one of these choices is Crete

- A. 210                      B. 240                      C. 250                      D. 255

89. Which one of these choices is Constantinople

- A. 208                      B. 221                      C. 252                      D. 260

**NATIONAL JUNIOR CLASSICAL LEAGUE**  
**ANCIENT GEOGRAPHY 1999**

**MAP SKILLS FOR QUESTIONS 90 - 94, USE MAP GAMMA**

Page Seven

90. Which one of these choices is Pylos

- A. 370                      B. 375                      C. 391                      D. 396

91. Which one of these choices is Euboea

- A. 372                      B. 378                      C. 392                      D. 396

92. Which one of these choices is Olympia

- A. 370                      B. 374                      C. 391                      D. 392

93. Which one of these choices is Athens

- A. 370                      B. 391                      C. 395                      D. 397

94. Which one of these choices is Thessalonika

- A. 375                      B. 391                      C. 396                      D. 398

**MAP SKILLS FOR QUESTIONS 95 - 100, USE MAP DELTA**

95. Which one of these choices is Cornwall

- A. 406                      B. 408                      C. 417                      D. 427

96. Which one of these choices is Dover

- A. 408                      B. 416                      C. 419                      D. 425

97. Which one of these choices is London

- A. 402                      B. 405                      C. 409                      D. 417

98. Which one of these choices is York

- A. 402                      B. 405                      C. 409                      D. 419

99. Which one of these choices is Colchester

- A. 408                      B. 409                      C. 414                      D. 416

100 Which one of these choices is Bath

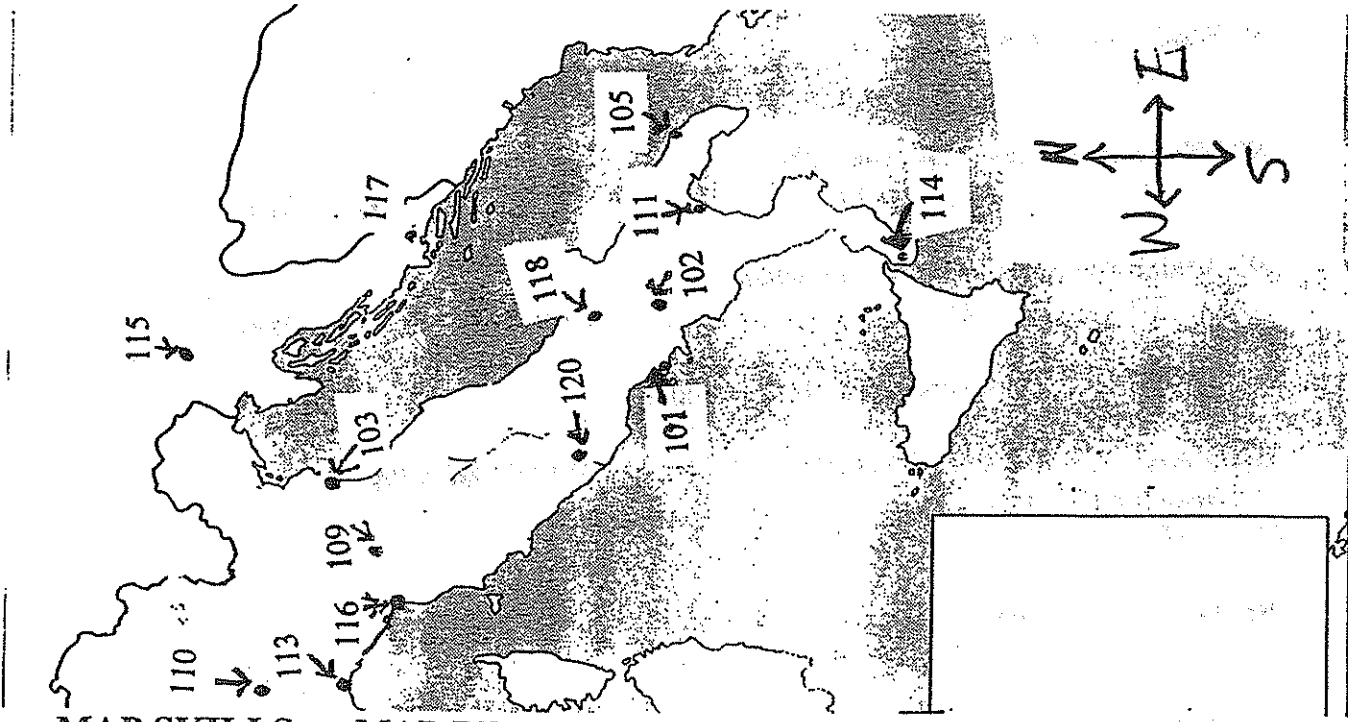
- A. 402                      B. 405                      C. 409                      D. 419

# NATIONAL JUNIOR CLASSICAL LEAGUE ANCIENT GEOGRAPHY 1999

Page Eight

MAP SKILLS

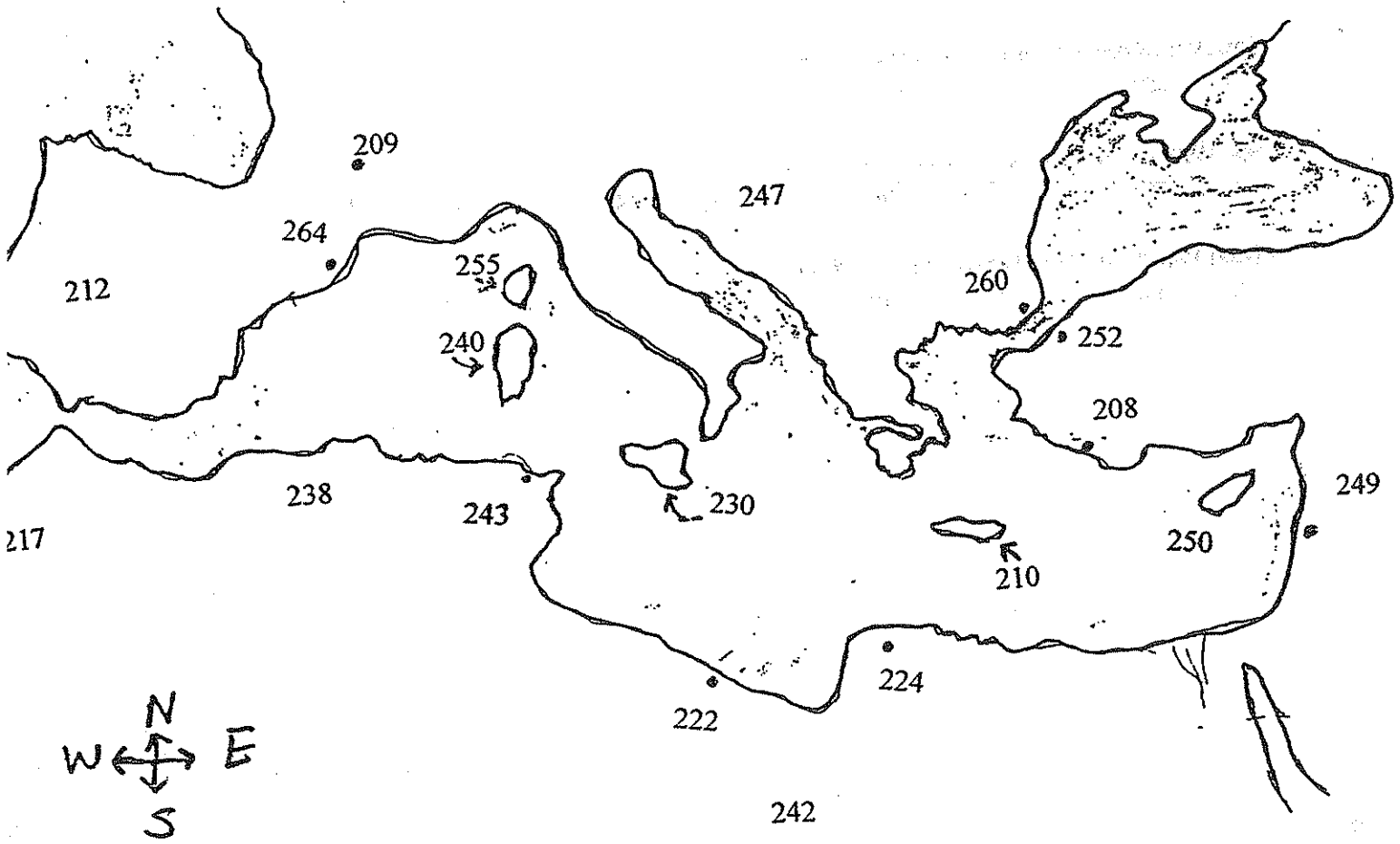
MAP ALPHA FOR QUESTIONS #71 - 78



MAP SKILLS

MAP BETA

USE FOR QUESTIONS 79 - 89





1. The first part of the document is a list of names and addresses of the members of the committee.

2. The second part of the document is a list of names and addresses of the members of the committee.

3. The third part of the document is a list of names and addresses of the members of the committee.

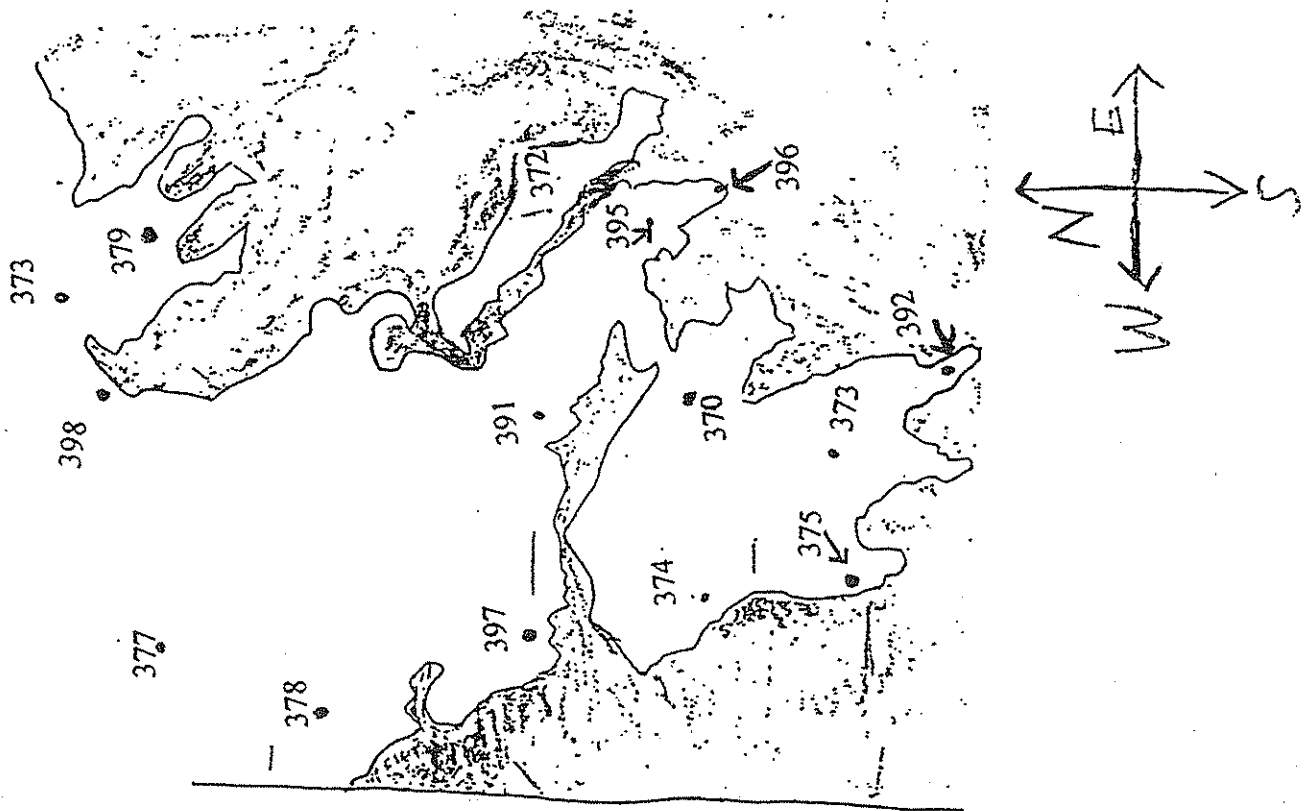
4. The fourth part of the document is a list of names and addresses of the members of the committee.

5. The fifth part of the document is a list of names and addresses of the members of the committee.

NATIONAL JUNIOR CLASSICAL LEAGUE  
ANCIENT GEOGRAPHY 1999

Page Nine

MAP SKILLS MAP GAMMA USE FOR QUESTIONS 90 - 94



MAP SKILLS MAP DELTA USE FOR QUESTIONS 95 - 100

